



LANCER'S CONVENT
CLASS II
SESSION 2021-2022
SUBJECT: MATHS
(MIXED SUMS)

Q1. Drag the answers from the yellow box and drop at the right place.

	H	T	O
	4	3	0
+	2	6	1

	H	T	O
	6	0	7
-	2	1	5

	H	T	O
	5	0	8
-	1	2	2

	H	T	O
	1	7	1
+	3	0	9

	H	T	O
	8	7	7
-	2	3	6

	H	T	O
	6	0	2
-	3	5	1

	T	O
	7	8
+	1	2

	T	O
	6	5
-	6	2

	T	O
	7	5
-	1	2

	T	O
	9	5
-	3	8

03

57

392

480

90

386

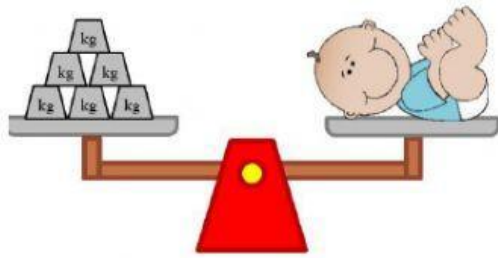
691

251

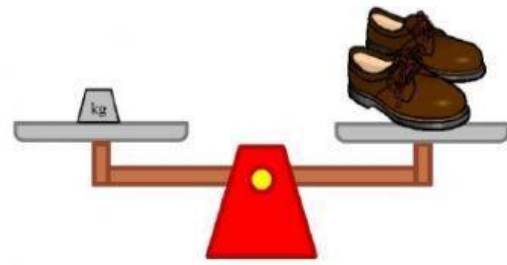
641

63

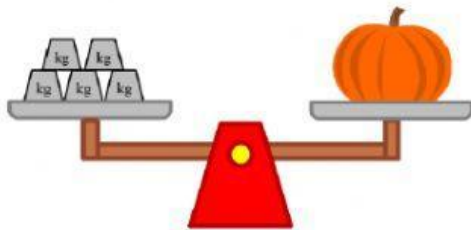
Q2- Count the weights on the weighing scale and write correct answer.



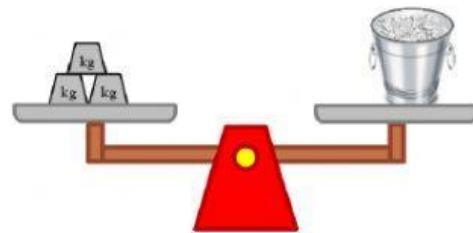
The baby weighs ____ kg.



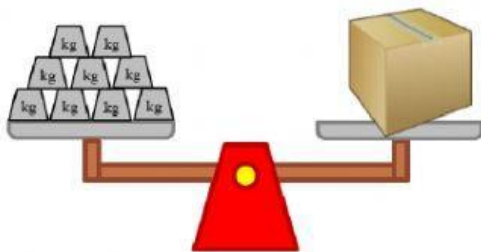
The pair of shoes weighs ____ kg.



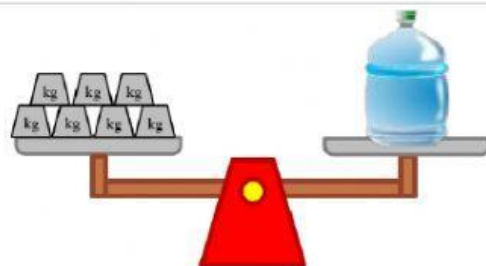
The pumpkin weighs ____ kg.



The ice bucket weighs ____ kg.



The box weighs ____ kg.



The water bottle weighs ____ kg.

Which object is the heaviest?

Which object is the lightest?

Find the total weight of baby and pumpkin?

Find the difference between the weight of the box and water bottle?
