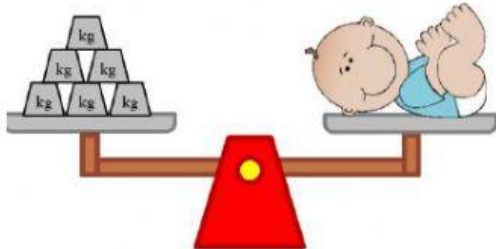




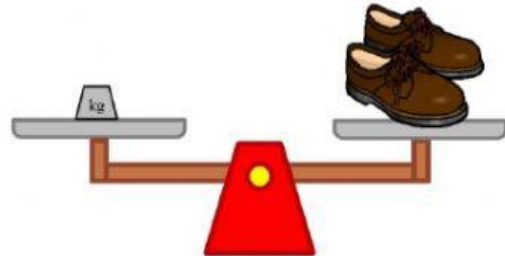
Lancer's Convent Class II

Measurement – Weight

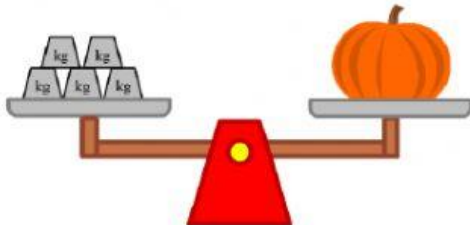
Q- Count the weights on the weighing scale and write correct answer.



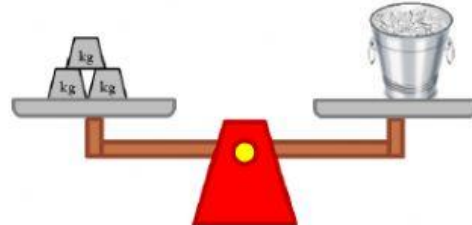
The baby weighs ____ kg.



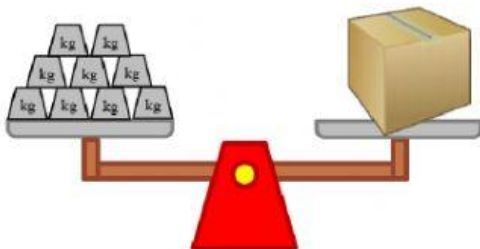
The pair of shoes weighs ____ kg.



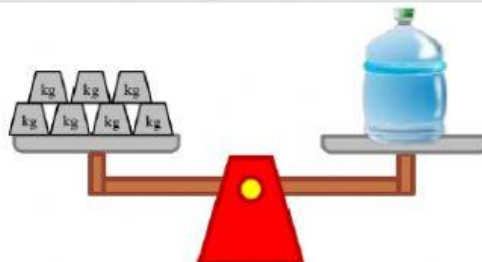
The pumpkin weighs ____ kg.



The ice bucket weighs ____ kg.



The box weighs ____ kg.



The water bottle weighs ____ kg.

Which object is the heaviest?

Which object is the lightest?

Find the total weight of baby and pumpkin?

Find the difference between the weight of the box and water bottle?
