


NOME _____

PROFESSORA: VALESCA _____

ENCONTRE OS RESULTADOS:



$$\begin{array}{r} 16 \\ +13 \\ \hline \end{array}$$

$$\begin{array}{r} 68 \\ +24 \\ \hline \end{array}$$

$$\begin{array}{r} 18 \\ +93 \\ \hline \end{array}$$


$$\begin{array}{r} 34 \\ +22 \\ \hline \end{array}$$




+




=



+



=



+



=





ENCONTRE OS RESULTADOS DAS SUBTRAÇÕES

$10 - 0 = \square$

$5 - 4 = \square$

$5 - 3 = \square$

$2 - 0 = \square$

QUAL A DIREÇÃO QUE A SETA INDICA
PARA O MENINO SEGUIR?



D - DIREITA
E - ESQUERDA

☐