

Name _____

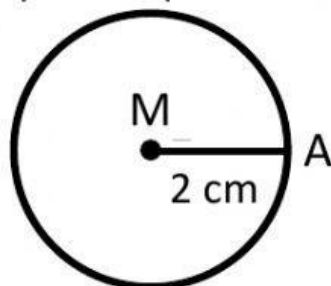
Date _____

Grade _____

Find the area of the given circle

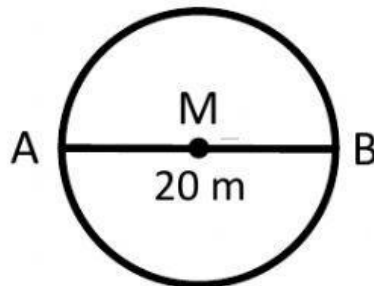
Please put the simplified version and the number rounded to the nearest hundredth

1.



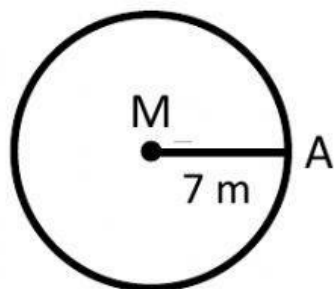
Answer = _____ cm^2

4.



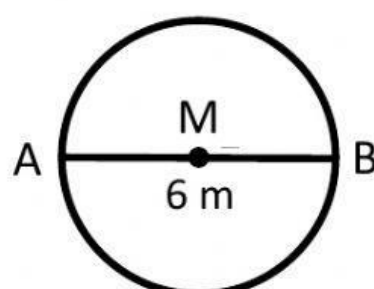
Answer = _____ cm^2

2.



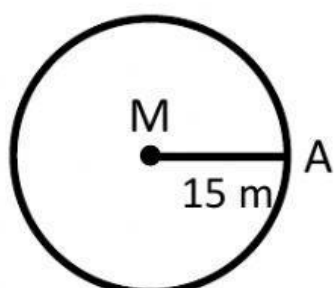
Answer = _____ cm^2

5.



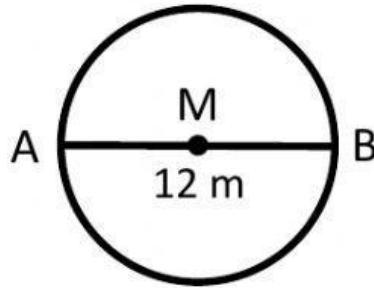
Answer = _____ cm^2

3.



Answer = _____ cm^2

6.



Answer = _____ cm^2