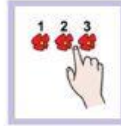
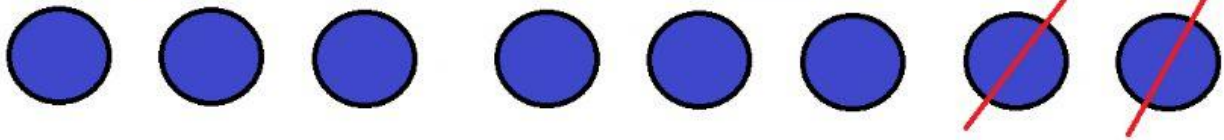


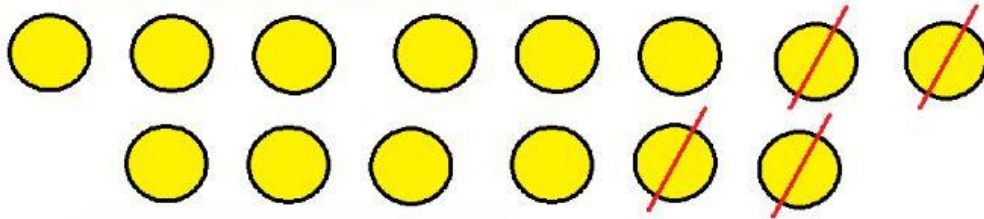
Calcula



$$\boxed{\quad} - \boxed{\quad} = \boxed{\quad}$$



$$\boxed{\quad} - \boxed{\quad} = \boxed{\quad}$$



$$\boxed{\quad} - \boxed{\quad} = \boxed{\quad}$$

