

Name: \_\_\_\_\_

Class: \_\_\_\_\_

# Fraction

## Equal & Unequal

Is these shape below equal or unequal? Choose 1 answer for each shape.

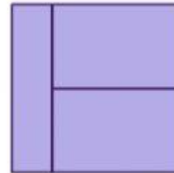
A)



equal

unequal

F)



equal

unequal

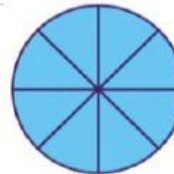
B)



equal

unequal

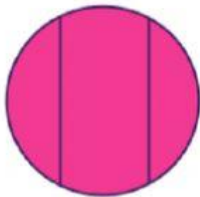
G)



equal

unequal


C)



equal

unequal


H)



equal

unequal


D)



equal

unequal

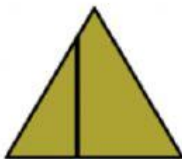
I)



equal

unequal


E)



equal

unequal

J)



equal

unequal

How did you find the questions?



Easy



Just right



Hard