

Name: _____ Class: _____ Date: _____

CHOOSE THE BEST ANSWER

1. Which of these animals has four legs?

- A. a duck B. a mouse C. a whale D. a millipede

2. Which part of the body is the man holding?



- A. Ankle B. Foot C. Knee D. Elbow

3. Where does this gorilla live?



- A. Sea B. Desert C. Field D. Jungle





4. Which one of these is best in a healthy diet?



- A. Doughnuts B. Vegetables C. Sweets D. Crisps

5.

Which of the functions of the outer coverings is not correctly stated?

	Animal	Outer Body Covering	Function
A.		feathers	Keep it warm
B.		scales	Help it to swim in the water
C.		Exoskeleton	Protect its body
D.		fur	Camouflage with its surroundings

6. How can you look after your ears?

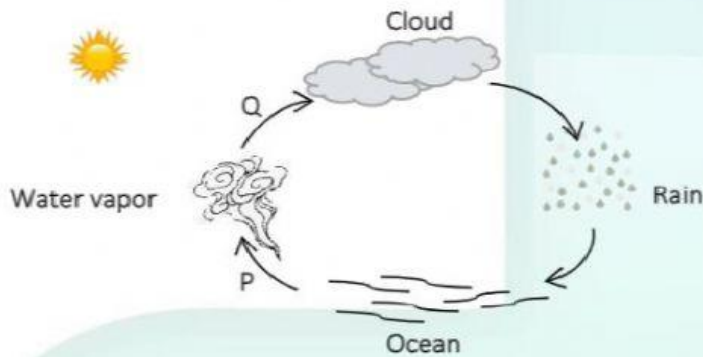
- A. By not listening too often to very loud music
- B. By never putting anything in your ear
- C. By wearing ear protectors around loud machinery
- D. All of the above

7. Most light energy on Earth comes from

- A. The moon
- B. Street lights
- C. Candles
- D. The sun

8.

Study the diagram of the water cycle below. P and Q are two processes that take place in the water cycle.



Based on the diagram above, which of the following statement(s) is/are incorrect?

- I. Heat is gained by water vapor during process Q.
- II. Process P does not take place at a fixed temperature.
- III. There is a change in state of water during processes P and Q.

- A. I only
- B. II and III only
- C. III only
- D. I, II, III





9. Luke is sat in the kart. Joe is stood behind the Kart. Joe gives the Kart a push. Which way does the kart move?



- A. Up in the air
- B. To the left
- C. Sideways
- D. To the right

10.

Which of the functions of the outer coverings is not correctly stated?

	Animal	Outer Body Covering	Function
A.		feathers	Keep it warm
B.		scales	Help it to swim in the water
C.		Exoskeleton	Protect its body
D.		fur	Camouflage with its surroundings

11. Sound can be made by all EXCEPT:

- A. Plucking a guitar
 B. Striking a drum
 C. Looking at doorbells
 D. Hitting a bell

12. This is a picture under a leaf. The frog is casting a shadow. Where is the frog?



- A. Under the leaf
 B. On top of the leaf
 C. Inside the leaf
 D. Nowhere near the leaf

13. People living in plains usually make

A. A house with sloping roof



B. A house with flat roof



C. A house boat



D. A Kutch house



14.

It was 6 pm in the Philippines when James called his father in the United States. His dad is taking his breakfast because he will start his day work as an accountant. Why is it that it was evening in the Philippines and morning in the United States?

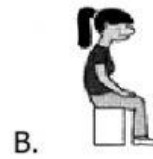
- A. The moon goes around the earth.
- B. US is far from the Philippines.
- C. The Earth spins around its axis for 24 hours.
- D. The sun sleeps and wakes up.

15.

Which of the following statements is correct?

- A. Gas has a fixed shape and size.
- B. Liquid has a fixed shape and size.
- C. Solid has fixed shape and size.
- D. Solid does not have shape and size.

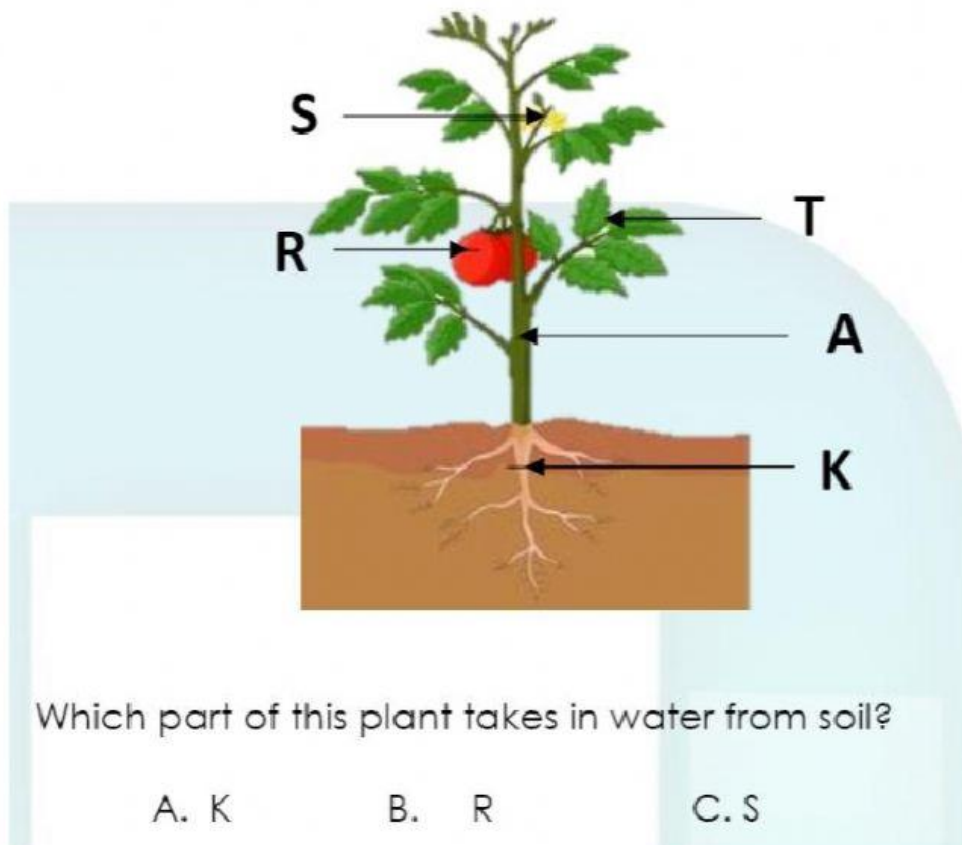
16. A good posture helps us to stay healthy. Which of the following postures do you think is correct?_



D. All of these

17.

Tomatoes need water from the ground to grow and survive.



Which part of this plant takes in water from soil?

A. K

B. R

C. S

D. T

18.

Joana gives Martin four pictures of some objects that can be found in space.

(I)



(II)



(III)



(IV)



She gave the following facts about those objects:

Satellite is an object that goes around the planet.

Uranus is an ice planet.

Asteroids are rocky objects that orbit the sun.

Mars is the red planet.

Which of the above pictures is an asteroid?

A. I

B. II

C. III

D. IV

19. Which vitamin is good for bone health, but is not an essential part of the diet because it can be made by the human body from sunlight?

A. Vitamin A

B. Vitamin D

C. Vitamin E

D. Vitamin K

20.

Lorena has this pebble.



How many centimeters (cm) long is the pebble?

A. 2

B. 5

C. 7

D. 9