

|   |   |  |
|---|---|--|
| <b>Viet Anh Primary School</b><br><br><b>Name.....</b><br><br><b>Nickname.....</b><br><br><b>Class: 1A1</b> | <b>1<sup>st</sup> SEMESTER TEST</b><br><br><b>School year:</b><br><b>2020-2021</b><br><br><b>Grade: 1</b><br><br><b>Subject: MATHS</b><br><br><b>Time: 35 minutes</b> | <b>Supervisor 1</b><br><br><b>Supervisor 2</b> |
| <b>Marks</b>  | <b>Comment</b>  |  |
|   |   |  |

## MATHS

1. How many?



4

5

6

2. How many?



8

10

9

3. Find the missing numbers:

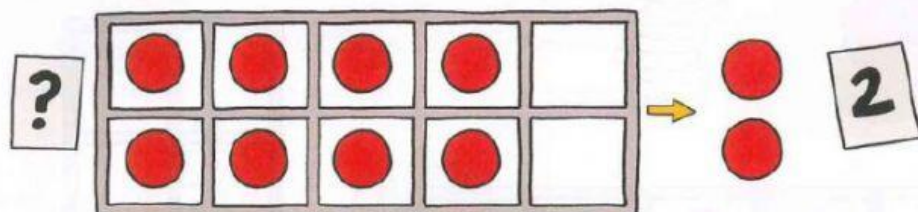


A. 5 - 7

B. 2 - 8

C. 3 - 8

4. How many are there left?




$$10 - 2 = ?$$

A. 8

B. 7

C. 9

5. How many are there left?



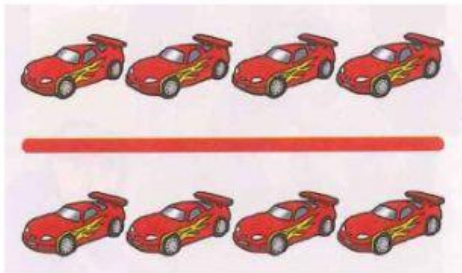
$$10 - 4 = ?$$

A. 5

B. 6

C. 4

6. Double 4 makes .....




5

6

8

7. Double 2 makes .....




8

4

6



8. Choose the correct answer:



longest

longest

longest

9. Choose the correct answer:



Giraffe is shorter.

Giraffe is taller.

10. Look and choose the correct answer:




taller

smaller

tallest

11. Who is the tallest?



brother

mom

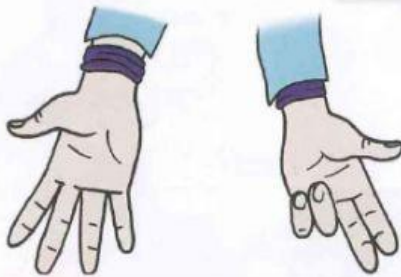
dad

Younger brother

12.

This is a number pair for

?



$4+2$

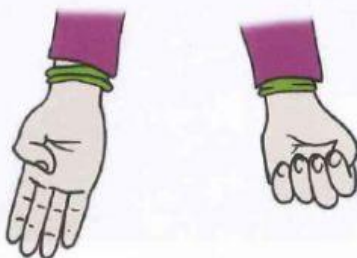
$5+3$

$5+2$

13.

This is a number pair for

?

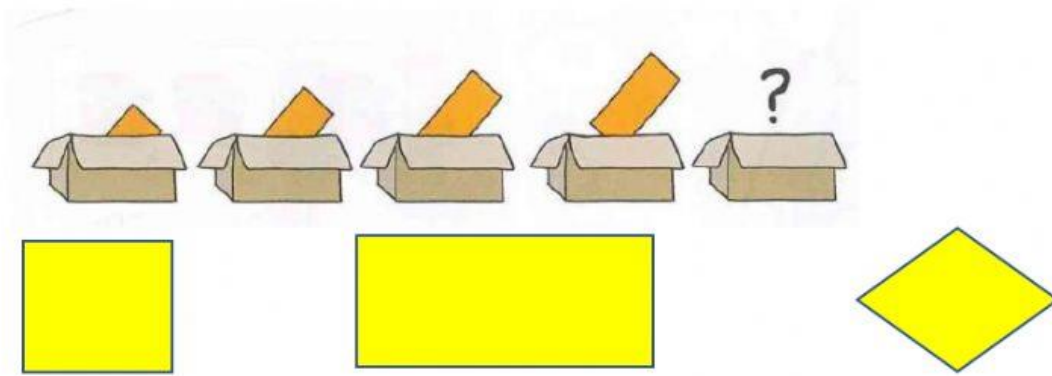


$4+0$

$4+5$

$4+4$

14. What shape is this?



15.

|           |   |   |    |
|-----------|---|---|----|
| $5 + 5 =$ | 9 | 8 | 10 |
|-----------|---|---|----|

16.

|            |   |   |   |
|------------|---|---|---|
| $10 - 7 =$ | 2 | 3 | 4 |
|------------|---|---|---|

17.

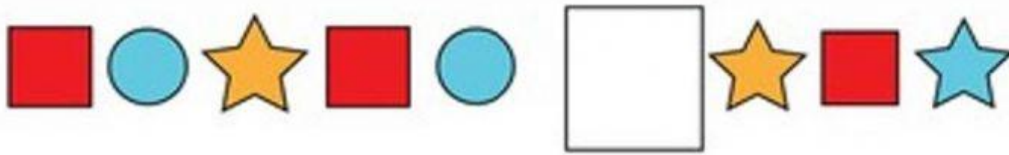
|           |   |   |   |
|-----------|---|---|---|
| $3 + 4 =$ | 6 | 7 | 8 |
|-----------|---|---|---|

18.

|           |   |   |   |
|-----------|---|---|---|
| $8 - 4 =$ | 4 | 5 | 3 |
|-----------|---|---|---|



19. What comes next?



20. What comes next?



**THE END!**