



Name: ( )	Class:	Date:
Parent's Initial:	Marks: /60	Results: %

**Section A Multiple Choice. Choose the correct answer (40pts)**

1. Which animal group does a bear belong to?

- (1) Mammals
- (2) Reptiles
- (3) Birds
- (4) Insects

( )

2. What is the function of part **N**?



**N**

- (1) To make food for the crocodile
- (2) To help the crocodile to keep warm
- (3) To help the crocodile to float on the water
- (4) To protect the crocodile from harm and danger

( )

3. Study the diagram below.

BIRDS	MAMMALS
X	Y

Which of the following can be Y?



- (1) sparrow
- (2) crow
- (3) sloth
- (4) parrot

( )

4. Which of the following is **not** a characteristic of an insect ?

- (1) It has six legs.
- (2) It lives on land and in water.
- (3) It has two wings.
- (4) It has two feelers.

( )

5. Study the living things below. Which of the living things below has a different reproduction?

- (1) Staghorn fern
- (2) Moss
- (3) Sunflower
- (4) Fungi

( )

6. The bodies of the animals are covered with\_\_\_\_\_?



- (1) fur
- (2) scales
- (3) feathers
- (4) skin

( )







7. The picture below show the different type of plants?  
What is the similarity between the plants shown?



- (1) They are flowering plants.
- (2) They reproduce through spores
- (3) They grow on water.
- (4) They grow on land.

( )

8. Study the table below:

C	D
	
	



Which one of the following headings best represents headings C and D?

	<b>C</b>	<b>D</b>
(1)	Fish	Reptiles
(2)	Mammals	Amphibians
(3)	Mammals	Reptiles
(4)	Fish	Amphibians

(      )

9. Which of the following shows the breathing method of the animals correctly?

	<b>Lizard</b>	<b>Human being</b>	<b>Toad</b>
(1)	lungs	lungs	gills
(2)	lungs	gills	skin
(3)	lungs	lungs	lungs and skin
(4)	lungs	lungs and skin	gills

(      )

10. Which group does an Emu belong to?

- (1) Mammals
- (2) Fish
- (3) Birds
- (4) Amphibians

(      )



11. Decide whether these statements true (T) or false (F).

Statements	True	False
a) The classification of things can be shown using a table or a chart.		
b) Strawberry jam is a non-living thing that was once alive.		
c) A moon is a living thing as it can moves itself.		
d) Non-flowering plants do not have fruits.		
e) Pears and watermelons are examples of inedible fruits.		
f) Human beings and birds are warm- blooded animals.		
g) Mould can be eaten.		
h) Bacteria can be carried by air and water.		
i) A few bacteria can be killed at high temperature.		
j) Fungi can be found in toilets, corners, walls of building and bodies of living things.		

12. Some bacteria can be used in the production of food **except**\_\_\_\_\_.

- (1) Yoghurt
- (2) Cheese
- (3) Sweet
- (4) Vinegar

( )

13. Which animal does not belongs to fish group?

- (1) Goldfish
- (2) Beta
- (3) Seal
- (4) Angelfish

( )



14. Which statement is true about tomato plant?



- (1) It has spore bag.
- (2) It grows in water.
- (3) It can bear flowers.
- (4) It has round-shaped leaves.

(     )

15. Which of the following can only be seen under a microscope?.

- (1) Bacteria
- (2) Jaw's ear
- (3) Seahorse
- (4) Toadstool

(     )

16. Which of the following is a characteristic of the fish?

- (1) It can fly.
- (2) It has two legs.
- (3) It breathes through lungs.
- (4) Its body is cover with scales.

(     )





**Section B. Open- ended Questions.(20 pts)**

17. Study the animals below.



(a) The above animals all lay eggs. Can they be classified as reptiles? Explain your answer.

---

---

(b) The platypus lays eggs to reproduce. Why is it classified as a mammal instead of bird?

---

---



17. Study the animals below:



(a) Which animal group does each of animals A and B belong to?

A : \_\_\_\_\_

B: \_\_\_\_\_

(b) What are the production methods for animal A and B?

\_\_\_\_\_

18. Label the parts of a fish.

