


$$2 \times 1 = \underline{\quad}$$




$$3 \times 1 = \underline{\quad}$$




$$5 \times 1 = \underline{\quad}$$



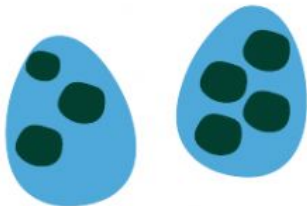
$$4 \times 1 = \underline{\quad}$$



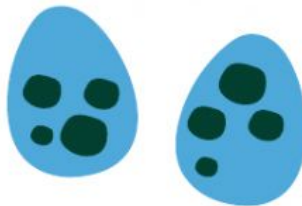
$$1 \times 1 = \underline{\quad}$$



$$6 \times 1 = \underline{\quad}$$



$$7 \times 1 = \underline{\quad}$$



$$8 \times 1 = \underline{\quad}$$



How many blue eggs are there altogether?

Can you write this as a sum?

$$\underline{\quad} \times 1 = \underline{\quad}$$