



Họ và tên :

Lớp : 1A...

CÂU LẠC BỘ NGÔI NHÀ MƠ ƯỚC

Phiếu số 4

Bài 1: Nối hình với số tương ứng.



1


2

3



4

5




6





Bài 2: Điền số thích hợp vào chỗ trống.





Bài 3:



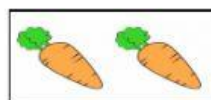


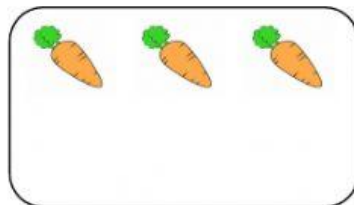
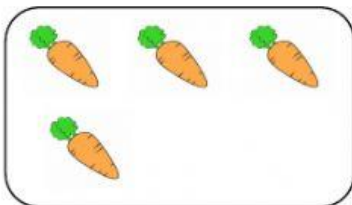
a. Chọn bạn thỏ có **nhiều** cà rốt nhất.



b. Chọn bạn thỏ có **ít** cà rốt nhất.



Bài 4: Thả thêm các củ cà rốt vào mỗi nhóm để mỗi bạn thỏ có **6 củ cà rốt**.



Bài 5 : Hái những quả táo vào đúng giỏ.

