

<b>Viet Anh Primary School</b> <b>Name.....</b> <b>Nickname.....</b> <b>Class: 2A3</b>	<b>1<sup>st</sup> SEMESTER TEST</b>  <b>School year:</b> <b>2020-2021</b>  <b>Grade: 2</b>  <b>Subject: Maths</b>  <b>Time: 35 minutes</b>	<b>Supervisor 1</b>
		<b>Supervisor 2</b>
<b>Marks</b>	<b>Comment</b>	

**1. What is the equivalent of  $39 + 2$ ?**

- a.  $28 + 14$       b.  $50 - 9$       c.  $12 + 32$       d.  $42 - 8$

**2. What is 27 rounded to the nearest 10?**

- a. 15      b. 10      c. 20      d. 30

**3. What is 75 rounded to the nearest 10?**

- a. 80      b. 90      c. 100      d. 86

**4. A tricycle has 3 wheels. How many wheels are there on 4 tricycles?**

- A. 7      B. 6      C. 12      D. 34

**5. What is the equivalent of  $46 - 6$ ?**

- A.  $23 + 4$       B.  $22 + 9$       C.  $35 + 5$       D.  $13 + 6$

6. Choose the correct answer:



A.  $10 \times 3$

B.  $5 \times 2$

C.  $10 + 10$

D.  $3 \times 5$

7. How many lines of symmestry?




A. 4

B. 6

C. 10

D. 5

8. Choose the correct answer:



A.  $4 \times 3$

B.  $10 \times 4$

C.  $4 + 10$

D.  $10 \times 10$

9. Find the equal of:

$$15 + 7 =$$

A.  $10 + 5$

B.  $5 + 20$

C.  $12 + 10$

D.  $20 - 10$

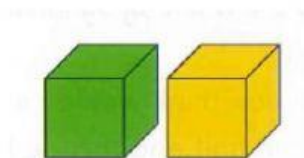
10. How many faces can you see?

A. 3 faces

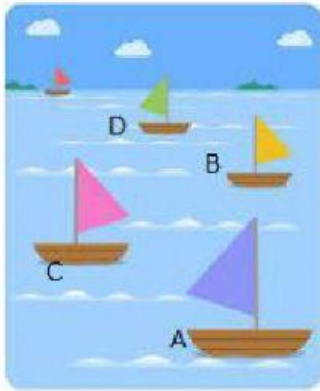
B. 12 faces

C. 6 faces

D. 2 faces

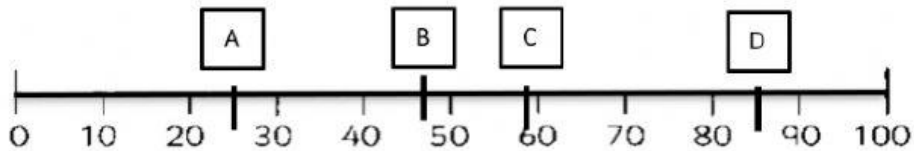


11. Which boat is the furthest? Circle the correct answer:



A.                      B.                      C.                      D.

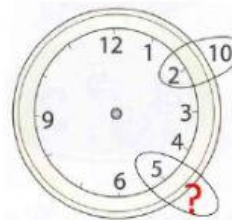
12. Where is number 25?



a. A                      b. B                      c. C                      d. D

13. What number is on the question mark '?'?

A. 9                      B. 3  
C. 7                      D. 10



14. The ♥ card is number pairs to 20. What number is on the other side of ♥



card?                      A. 21                      B. 11                      C. 20                      D. 13

15. The ☆ card is number pairs to 30. What number is on the other side of ☆



card?

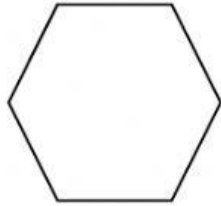
A. 20

B. 22

C. 28

D. 30

16. What shape is it?



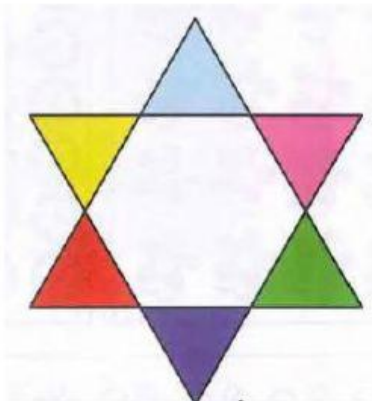
A. Pentagon

B. Triangle

C. Circle

D. Hexagon

17. How many triangles do we use to make this star?



A. 6

B. 4

C. 8

D. 10

18. How long is the pencil?



7 centimeters

8 centimeters

9 centimeters

There are 46 students in a class. 24 of them are girls. How many boys are there in the class?

19.

A. 22

B. 70

C. 48

20. What time is it?

A. twelve o'clock

B. nine o'clock

C. three o'clock



There are 28  .

14  fly away.

How many are left? \_\_\_\_\_

21.

A. 12

B. 15

C. 14

22. You have number 42. Should you round up or round down?

A. Round up

B. round down

23. Find the midpoint number in the list:

0 10 20 30 40 50 60 70 80 90 100

A. 30

B. 50

C. 60




24. What number is this?

A. twenty-five

B. twenty-four

C. thirty-four

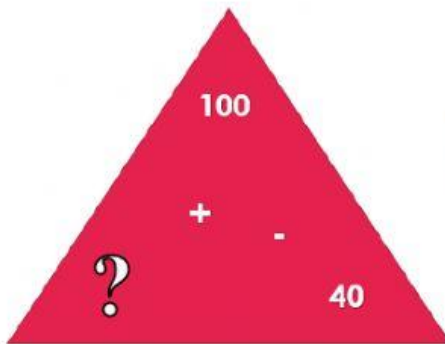
25. Find the numbers between 70 and 80:



70,71,72,73,74,75,76,77,78,79

71,72,73,74,75,76,77,78,79

26. Find the fact family for number pairs to 100:




50

60

40

27. How many dots are there?



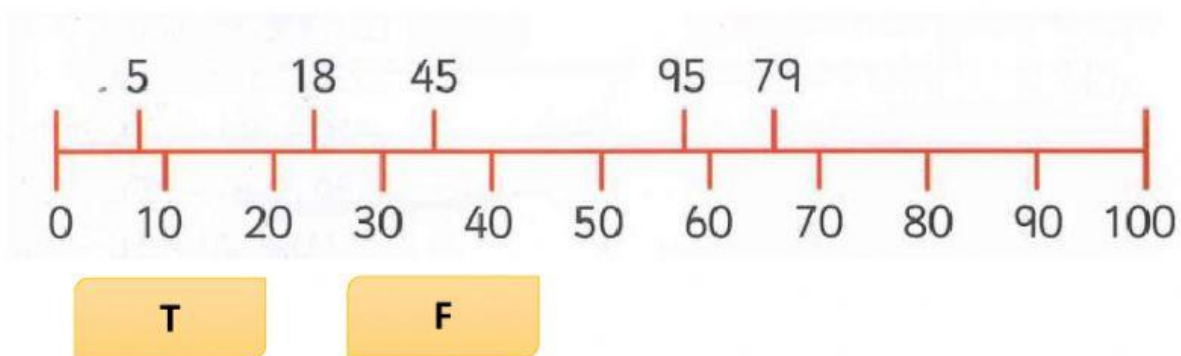
A. seven

B. seventy

C. seventeen



28. Choose True (T) or False (F)



29. Jessy keeps a football in the air within 1 minute.  
John keeps a football in the air within 30 seconds

**Who keeps a football in the air longer?**

- A. Jessy                      B. John                      C. both
- 30.

If Lucy is paid \$1 for every wheel she cleans, how many dollars does she get to clean five tricycles?

- A. 10                      B. 20                      C. 15

**The end!**