

TECHNOLOGY AND LIVELIHOOD 7
WEEK 6 POST SYNCHRONOUS ACTIVITY

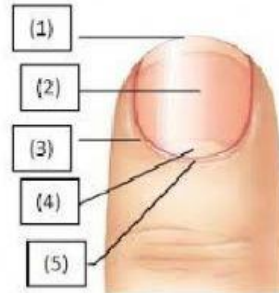
Name: _____

Grade 7- _____

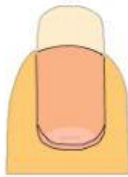
- A. Identify the parts of the nail. Choose the correct answer on the box below. Type your answer in small letters only.

Matrix	Lunula
Nail plate	Cuticle
Free edge	Lunula

1. _____
2. _____
3. _____
4. _____
5. _____



- B. Identify the shape of nails. Wrong spelling, wrong. Type your answer in small letters only.



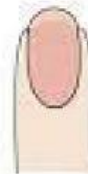
a. _____ nail



b. _____ nail



b. _____ /pointed nail



d. _____ nail



e. _____ nail