

Name: _____

[BS3] Science Assessment Year 3


Class: _____

Semester Test 1 - Review

**I. The Structure of Animals:
Choose the correct answer**

1. Look at the picture! What is this part called?

- a stripe
- a spot
- a horn



2. Which of these animals has stripes on its body?

- a zebra
- a lion
- a rabbit



3. Which of these animals has horns on its head?

- a snake
- a leopard
- a rhino




4. Look at the bird! What is covering on its body?

- horns
- feathers



5. Look at the fish! What does it have on its body?

- fins and scales
- wings and feathers



6. Do fish lay eggs?

- Yes, they do
- No, they don't



II. Parts of a Plant

Choose the correct answers

1. Look at the picture! Is it a plant or a tree?

It's a tree

It's a plant



2. Which part of a potato plant can we eat?

root

leaf

flower



3. Which part of the plant do these foods come from?

fruit

flower

root



4. Where do these animals live?

in an ocean

in a forest

in a desert




5. Where would you expect to find a crocodile?

in a marsh

in an ocean

in a desert



6. Which of these are you NOT likely to find in a forest?

a deer

a rabbit

a shark

