



SCHIERAMENTI E MOLTIPLICAZIONI

1 Per ogni schieramento, scrivi due moltiplicazioni. Osserva l'esempio.



$$4 \times 3 = \dots\dots\dots$$

$$3 \times 4 = \dots\dots\dots$$




$$\dots\dots\dots \times \dots\dots\dots = \dots\dots\dots$$

$$\dots\dots\dots \times \dots\dots\dots = \dots\dots\dots$$



$$\dots\dots\dots \times \dots\dots\dots = \dots\dots\dots$$

$$\dots\dots\dots \times \dots\dots\dots = \dots\dots\dots$$




$$\dots\dots\dots \times \dots\dots\dots = \dots\dots\dots$$

$$\dots\dots\dots \times \dots\dots\dots = \dots\dots\dots$$




$$\dots\dots\dots \times \dots\dots\dots = \dots\dots\dots$$

$$\dots\dots\dots \times \dots\dots\dots = \dots\dots\dots$$




$$\dots\dots\dots \times \dots\dots\dots = \dots\dots\dots$$

$$\dots\dots\dots \times \dots\dots\dots = \dots\dots\dots$$



$$\dots\dots\dots \times \dots\dots\dots = \dots\dots\dots$$

$$\dots\dots\dots \times \dots\dots\dots = \dots\dots\dots$$



$$\dots\dots\dots \times \dots\dots\dots = \dots\dots\dots$$

$$\dots\dots\dots \times \dots\dots\dots = \dots\dots\dots$$