






Name:
School:
Class: **Grade 5**
Subject: **Math** Title: **Lines**

Interactive Worksheet: Week 14/Day 1 Self-Learning Program

Indicate the type of each line then find its correct name:

Figure: **M**  **N** **M**  **N** **M**  **N**

Type:

Name: