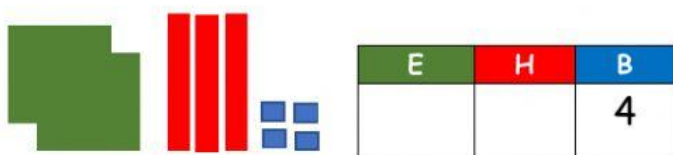


ZENBAKIAK

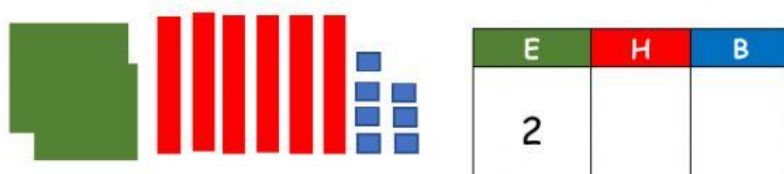
Zenbatu eta osatu



$$\boxed{2} E + \boxed{} H + \boxed{} B = \boxed{234}$$

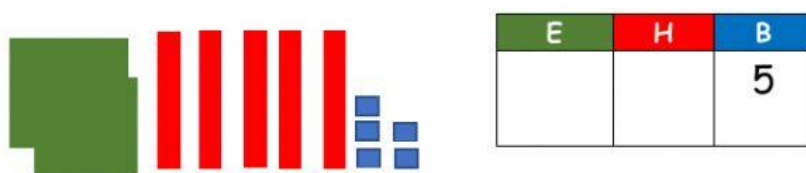
$$\boxed{} + \boxed{30} + \boxed{} = \boxed{}$$

Berrehun eta hooeita hamalau



$$\boxed{2} E + \boxed{} H + \boxed{} B = \boxed{}$$

$$\boxed{} + \boxed{60} + \boxed{} = \boxed{}$$



$$\boxed{} E + \boxed{5} H + \boxed{} B = \boxed{}$$

$$\boxed{200} + \boxed{} + \boxed{} = \boxed{}$$