

Look at the pictures. What kind of material is it made from?



Match the object to the property.

Hard

soft

stretch



Round

Rectangular

Cylindrical



Rough

Smooth

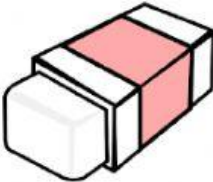









Look at the groups. Answer the questions. Drag the objects to the box in the correct group.

The objects are sorted by

Group A is

Group B is

Group A	Group B
   	   



The objects are sorted by

Group A is

Group B is

Group A	Group B
