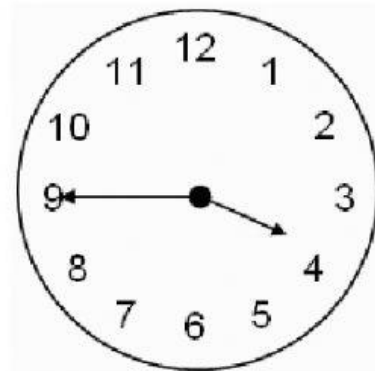


## What time is it?




5:15 pm

It's a quarter past five




4:45pm

it's a quarter to five



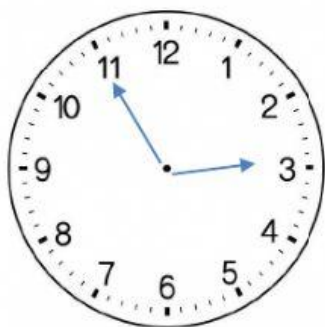
10:30 am

It's half-past ten




6:00 am

It's six o'clock



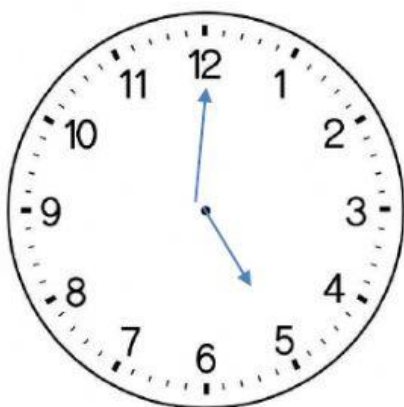
3:55pm

It's five to four



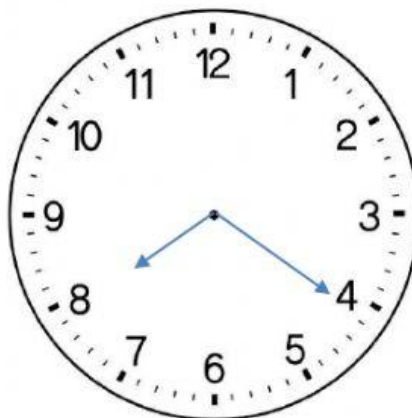
7:40 am

It's twenty to eight



5:00 am

---



8:20 am

---

## Reading Clocks

Read each clock and write the time.

1)



2)



3)



4)



5)



6)



7)



8)



9)

