

1. Fill in the clock. (10)

O'CLOCK

PAST

QUARTER TO

QUARTER PAST

TO

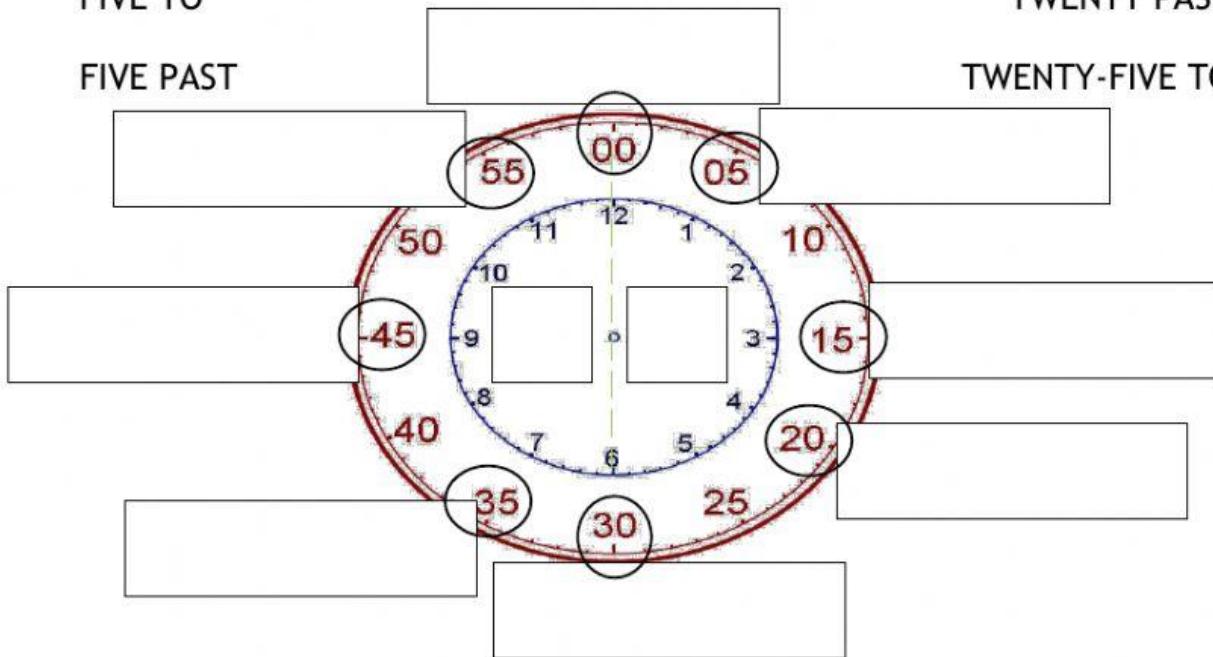
HALF PAST

FIVE TO

TWENTY PAST

FIVE PAST

TWENTY-FIVE TO



2. Match the clocks writing a number in the box. (5)











1 - It's twenty-five to nine.

2 - It's five past eleven.

3 - It's ten past three.

4 - It's ten to five.

5 - It's seven o'clock.

6 - It's half past six.









7 - It's quarter to eleven.

8 - It's twelve o'clock.

9 - It's twenty past one.

10 - It's twenty past one.

3. Write the time. (8)

1.		01:45	_____
2.		07:25	_____
3.		01:00	_____
4.		03:05	_____
5.		07:40	_____
6.		09:15	_____
7.		03:35	_____
8.		09:00	_____

4. Write 3 sentences following this model (DON'T COPY IT).

ON MONDAYS, I GET UP AT HALF PAST SIX IN THE MORNING.
