



EXCELSIOR INTERNATIONAL SCHOOL

MATH CLASS

III TRIMESTER

Teacher Daniela Moreno

Student's name: _____ Level: 3 score: 50

I- A.M. and P.M. Look at the clock and choose the correct answer. 12pts



IT'S ONE O'CLOCK

IT'S SIX O'CLOCK

IT'S TWO O'CLOCK



IT'S TEN O'CLOCK

IT'S SEVEN O'CLOCK

IT'S FIVE O'CLOCK



IT'S FOUR O'CLOCK

IT'S ELEVEN O'CLOCK

IT'S THREE O'CLOCK



IT'S TWO O'CLOCK

IT'S NINE O'CLOCK

IT'S EIGHT O'CLOCK



IT'S FIVE O'CLOCK

IT'S TWELVE O'CLOCK

IT'S TWO O'CLOCK

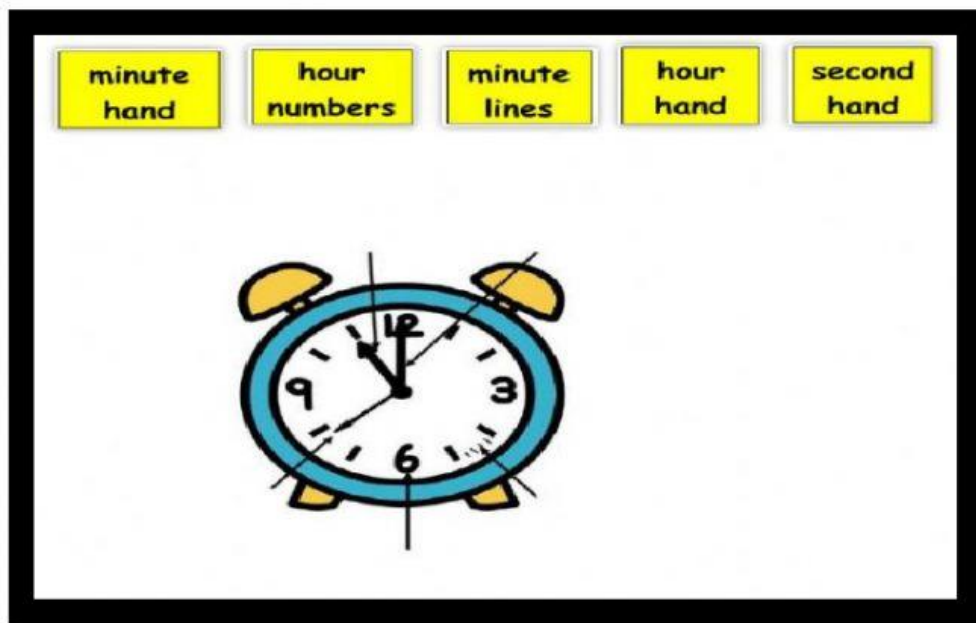


IT'S TWO O'CLOCK

IT'S ONE O'CLOCK

IT'S SIX O'CLOCK


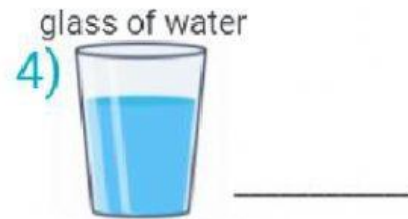
II. Time to the minute: **drag** the names to correctly label the analogue clock. 10pts



III-Measure Length: **write** the correct length 14pts

1)		<input type="checkbox"/> paper clips
2)		<input type="checkbox"/> paper clips
3)		<input type="checkbox"/> paper clips
4)		<input type="checkbox"/> paper clips
5)		<input type="checkbox"/> paper clips
6)		<input type="checkbox"/> paper clips
7)		<input type="checkbox"/> paper clips

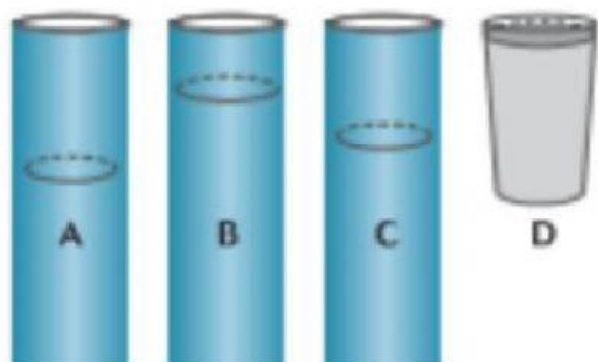
IV. Volume and Liquids.: Estimate how much liquid there will be when the container is filled. **WRITE MORE THAN 1 LITER, ABOUT 1 LITER, or LESS THAN 1 LITER** 12pts



V. Problem Solving

Peter pour water into four glasses that are the same size. 2pts

- Which glass has the least amount of water?
- Which glass has the most amount of water?



Good Luck!