

Mathematics

Tens and Ones Twenty Family Numbers




Instructions: Type how many tens and ones in each number.

a. 25= ____tens and ____ ones b. 20=____tens and ____ ones

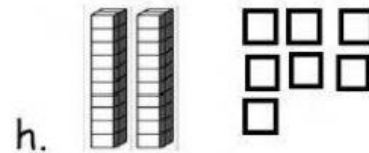
c. 29=____tens and ____ ones d. 24=____tens and ____ ones

e. 26=____tens and ____ ones f. 21=____tens and ____ ones

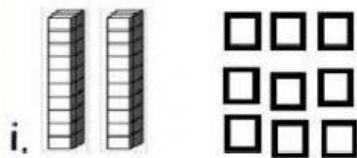
Instructions: Type how many tens and ones in each number.




Tens	Ones



Tens	Ones



Tens	Ones



Tens	Ones