

Nhận xét của giáo viên:

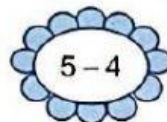

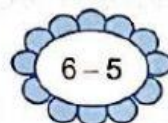
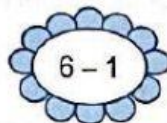
**1 Tính nhẩm:**

$2 - 1 = \dots$   
 $6 - 3 = \dots$   
 $6 - 2 = \dots$

$5 - 1 = \dots$   
 $4 - 4 = \dots$   
 $6 - 4 = \dots$

$5 - 2 = \dots$   
 $4 - 1 = \dots$   
 $6 - 6 = \dots$

**2 Tô màu các phép tính có kết quả là 1:**



**3 Tính nhẩm:**

$5 - 0 = \dots$

$3 - 0 = \dots$

$4 - 0 = \dots$

$2 - 0 = \dots$

$6 - 0 = \dots$

$1 - 0 = \dots$

**4 Viết số thích hợp vào ô trống (theo mẫu):**

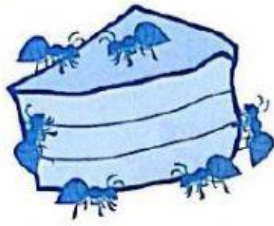
6		
6	-	

2		
6	-	4
5	-	
4	-	
3	-	
2	-	


3		
6	-	3
5	-	
4	-	
3	-	

1		
2	-	1
3	-	
4	-	
5	-	
6	-	
1	-	

5 a) Số?




Có  



-  =




-  =





-  =

b) Xem tranh rồi tập kể chuyện theo mỗi phép tính trên.


6 a) Số?




Có  



-  =



-  =



-  =

b) Xem tranh rồi tập kể chuyện theo mỗi phép tính trên.