



COLEGIO SAN TARSICIO
Second Term Exam 2021-2022
Geography – 4th Grade



NAME: _____ DATE: _____

MARK: _____

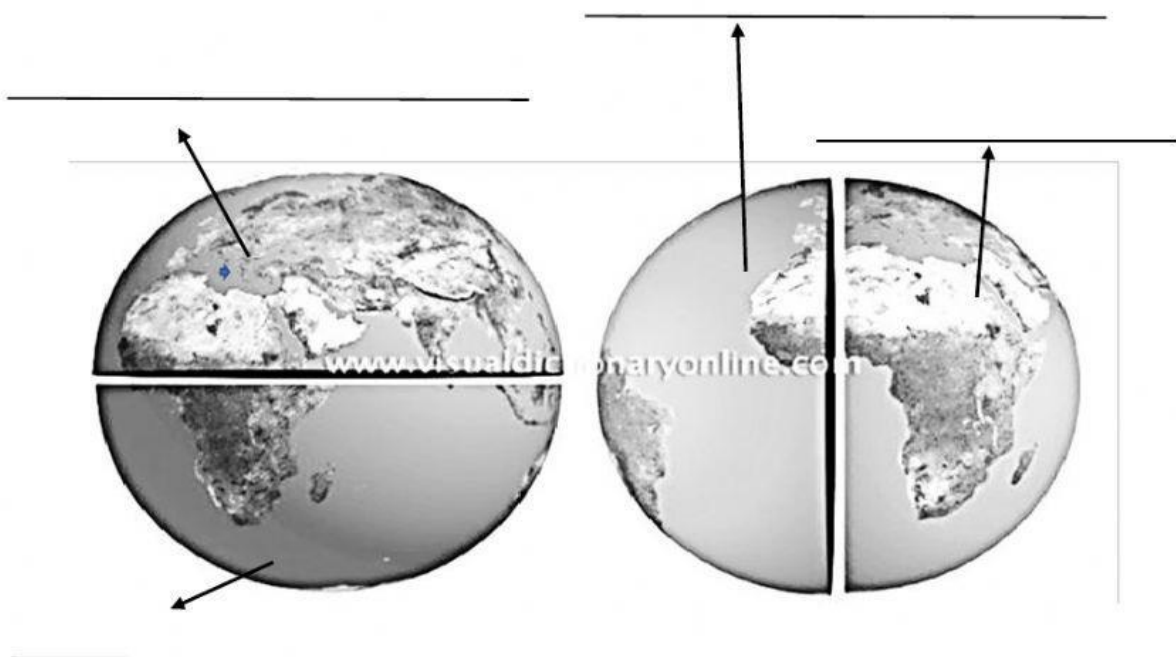
1. Complete the following sentences. Use the words in the box: (10 marks)

Latitude	southern	Prime	Meridian	eastern
Equator	west	longitude	western	northern

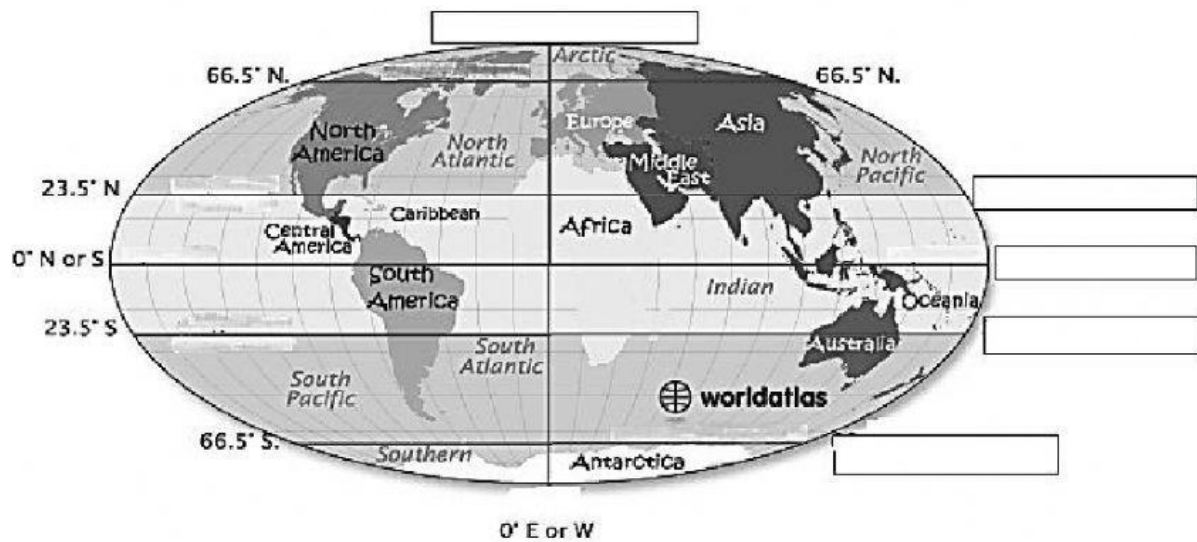
Lines of _____ are the imaginary lines that run from east to _____. The _____ is the line that divides the Earth into the _____ hemisphere and the _____ hemisphere.

Lines of _____ are the imaginary lines that run from north to south. The line 0° is known as _____, and this line divides the Earth into two hemispheres: the _____ hemisphere and the _____ hemisphere.

2. Name the four hemispheres of Earth in the correct place: (10 marks)

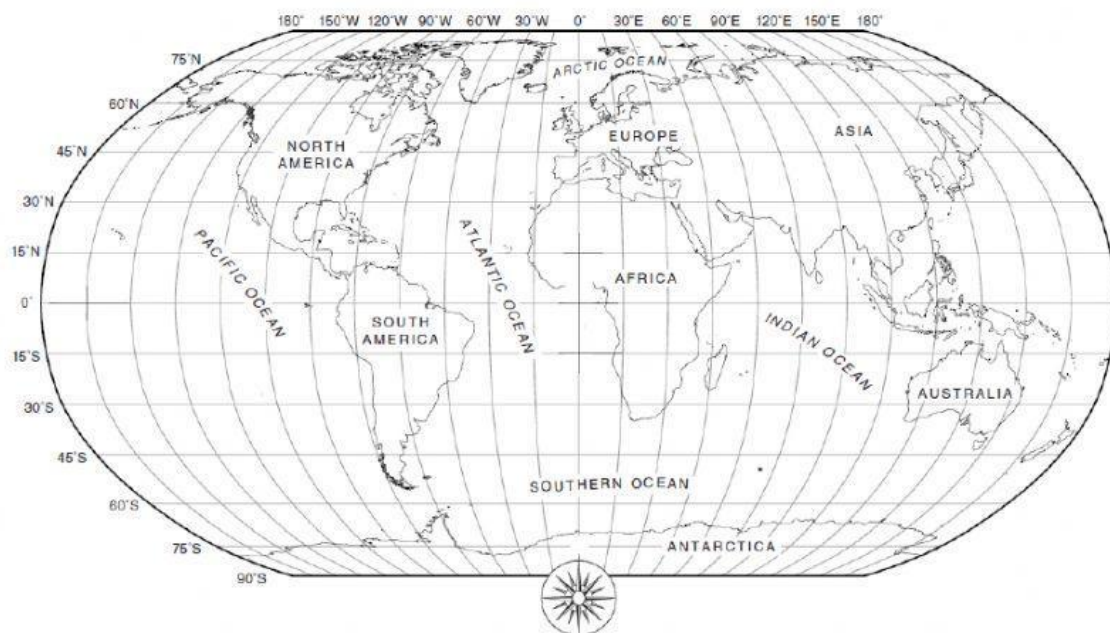


3. Locate on the map: The Equator, Prime Meridian, Tropic of Capricorn, Tropic of Cancer, and the Antarctic circle. (10 marks)



4. Locate on the map the coordinates below, and write the name of the continent or ocean that you find: (10 marks)

The World



- Longitude 30° East, Latitude 15° North: _____
- Long. 60° W, Latitude 0°: _____
- Long 120° W, Latitude 45° N: _____
- Long 140° W, Latitude 15° S: _____
- Long 30° E, Latitude 60° N: _____

5. Look at the map again and answer the following questions: (10 marks)

What does the word hemisphere mean?

In which hemispheres is most of South America located?

In which hemispheres is Australia located?

What is the name of the point formed by a longitudinal and latitudinal line?

What is the main purpose of knowing how to use the lines of longitude and latitude?
