
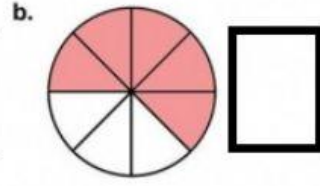
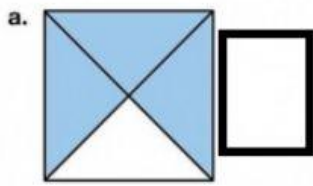


Name: _____

Fractions

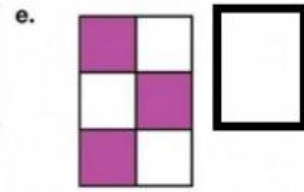
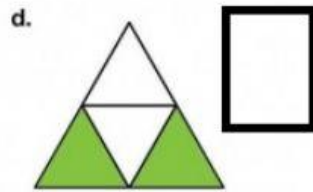
Tell what fraction of each shape is shaded.



$\frac{2}{4}$

$\frac{3}{8}$

$\frac{3}{4}$



$\frac{3}{6}$

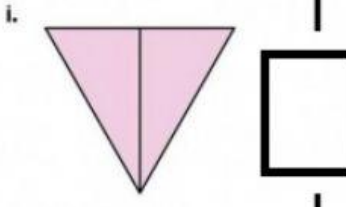
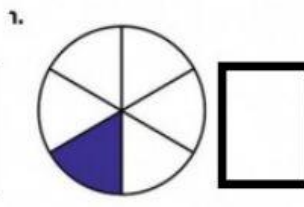
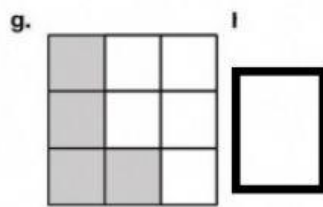
$\frac{5}{6}$

$\frac{2}{2}$

$\frac{2}{5}$

$\frac{1}{6}$

$\frac{2}{4}$



$\frac{1}{2}$

$\frac{4}{9}$

$\frac{5}{8}$

