




# 3-digit numbers - Numbers to 1 000


1. The aliens are speaking another language and only mathematicians can hear them. Write the numbers the aliens are saying using numerals.



3 hundreds 1 tens and 7 ones



6 hundreds 4 tens and 6 ones



9 hundreds and 7 ones



1 hundreds 2 tens and 1 ones




8 hundreds 8 tens and 2 ones



9 hundreds 6 tens and 4 ones



7 hundreds 1 tens and 8 ones



2 hundreds and 4 tens

2. Count:

a.	b.	c.	d.
3 7 8	5 4 2	4 2 5	6 1 7
- 5 6	- 1 9	- 4 2	- 3 5

Read these word problems and write out the calculation as column subtraction in the space below.

k.

Sam had 218 trading cards, she gave 164 away. How many does she have left?

l.

A baker bakes 248 iced buns. He sells 195. How many buns does he have left over?

3. Count:

4. Work out the answer:

$$\begin{array}{r} \text{a) } \square 7 2 \\ + 6 2 1 \\ \hline 9 \square 3 \end{array}$$

$$\begin{array}{r} \text{b) } 4 5 \square \\ + 1 2 2 \\ \hline 5 \square 3 \end{array}$$

$$\begin{array}{r} \text{c) } 4 7 3 \\ + 5 4 2 \\ \hline \square 1 5 \end{array}$$

$$\begin{array}{r} \text{d) } \square 2 1 \\ + 1 4 4 \\ \hline 4 \square 5 \end{array}$$

$$\begin{array}{r} \text{e) } 6 0 \square \\ + 2 2 8 \\ \hline \square 2 8 \end{array}$$

$$\begin{array}{r} \text{f) } 5 1 1 \\ + 8 4 3 \\ \hline \square 5 4 \end{array}$$

$$\begin{array}{r} \text{g) } 4 3 \square \\ + 1 9 2 \\ \hline \square 2 7 \end{array}$$

$$\begin{array}{r} \text{h) } 6 6 9 \\ + 3 3 3 \\ \hline 1 \square \square 2 \end{array}$$

a) I have a sack of 345 potatoes and another bag with 212. How many potatoes do I have altogether?

Answer: \_\_\_\_\_

b) I have a box of 352 pencils and my brother has a box of 278. How many pencils do we have altogether?

Answer: \_\_\_\_\_



5. Count:

$+ 150 = 1000$	$+ 710 = 1000$	$+ 320 = 1000$
----------------	----------------	----------------

6. Arrange the numbers


a. in increasing order

<  <  <  <  <



b. in decreasing order.

>  >  >  >  >



7. Work out what numbers the pictures represent.

a.

	3	
+		2
9	7	1

	=	_____
	=	_____
	=	_____

b.

	4	
+		5
9	1	2

	=	_____
	=	_____
	=	_____

8. Regroup the number into hundreds, tens and ones.

- a.  $328 = 300 +$  \_\_\_\_\_      b.  $620 =$  \_\_\_\_\_
- c.  $198 =$  \_\_\_\_\_      d.  $407 =$  \_\_\_\_\_

9. Choose the correct symbol: <, = or >.

- a.  $532$    $542$       b.  $218$    $219$
- $384$    $348$        $772$    $774$
- c.  $281$    $200 + 81$
- $442$    $450 - 12$

10. Viết tiếp vào chỗ trống:

Viết số	Đọc số
876	
	Chín trăm hai mươi lăm.
898	
	Một trăm linh hai.
255	

11. Khoanh vào chữ đặt trước câu trả lời đúng:

a. Số nhỏ nhất có ba chữ số khác nhau là:

**A.**100

**B.** 101

**C.**102

**D.**111

b. Số lớn nhất có ba chữ số khác nhau là:

**A.**900

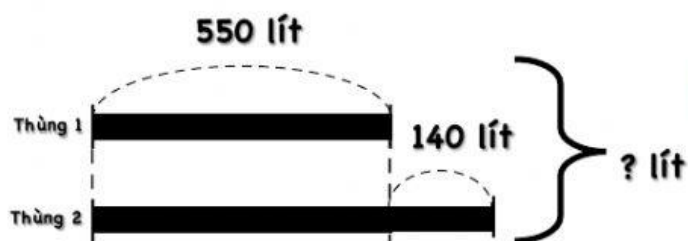
**B.** 999

**C.**998

**D.**987

12. Thùng thứ nhất có 550 lít nước mắm, thùng thứ hai có nhiều hơn thùng thứ nhất 140 lít. Hỏi cả hai thùng có tất cả bao nhiêu lít nước mắm?

**Tóm tắt:**



Bài giải

Đáp số:            lít

12. Cho ba số 6;8;3. Em có thể lập được các số có 3 chữ số nào?