

Electricity Unit Test

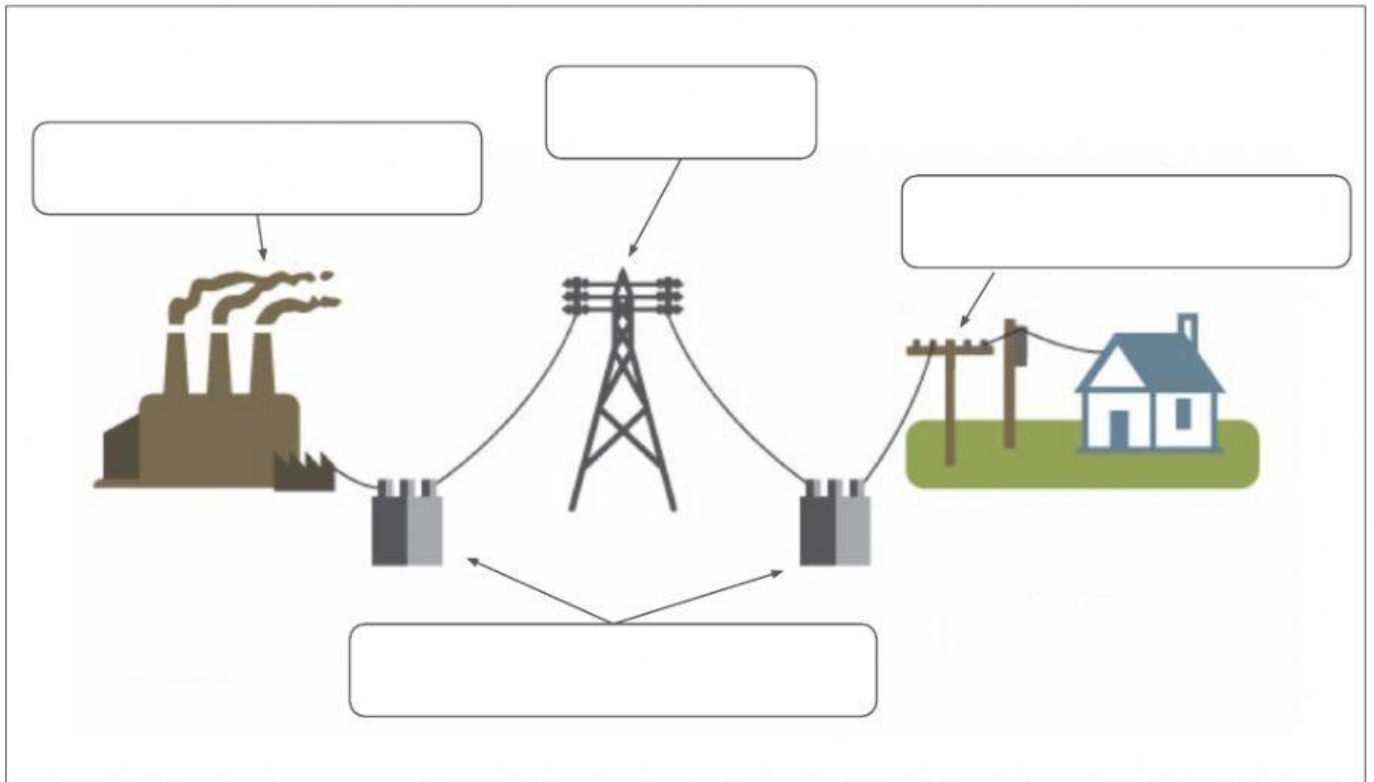
Label the diagram. Use the word bank

power pole

pylon

power station

transformers



Choose the correct type of energy source.

natural gas

Renewable

Non-renewable

running water

Renewable

Non-renewable

wind

Renewable

Non-renewable

oil

Renewable

Non-renewable

coal

Renewable

Non-renewable

sunlight

Renewable

Non-renewable

Label the power stations. Use the word bank.


wind farm

solar

hydroelectric

fossil-fueled

geothermal



Circle the best answer to complete the sentence.

Solar thermal power stations use energy from **sunlight** / running water

Hydroelectric power stations use energy from **coal** / running water

Wind farms use energy from **wind** / sunlight

Choose 'true' or 'false' from the statements below.



You should not overload a plug socket.

true

false



It is okay to use devices with broken wires.

true

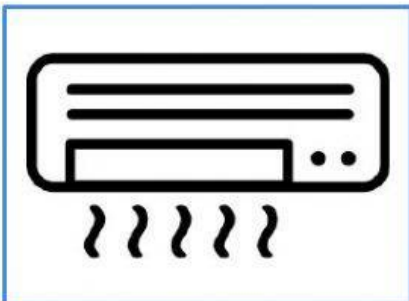
false



Never touch electrical appliances with wet hands.

true

false



Use air conditioning all day to save or conserve energy.

true

false



It is okay to keep the fridge door open.

true

false



You should wash a full load and use cold water to save energy.

true

false