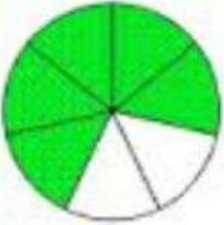

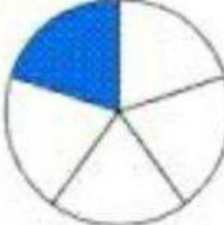
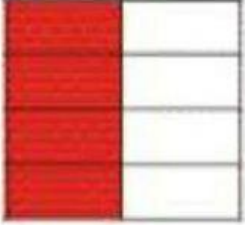
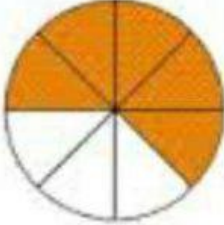

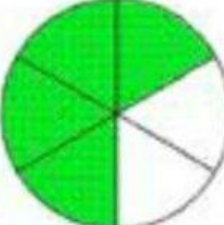
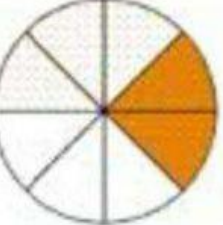





## Fractions Worksheets

Comparing fractions. Which fraction is less/greater.

Mark with X in the box

1.	Which fraction is greater ?	<input type="checkbox"/> $\frac{5}{7}$ 	<input type="checkbox"/> $\frac{1}{3}$ 
2.	Which fraction is less ?	<input type="checkbox"/> $\frac{1}{5}$ 	<input type="checkbox"/> $\frac{4}{8}$ 
3.	Which fraction is greater ?	<input type="checkbox"/> $\frac{5}{8}$ 	<input type="checkbox"/> $\frac{2}{3}$ 
4.	Which fraction is less ?	<input type="checkbox"/> $\frac{4}{6}$ 	<input type="checkbox"/> $\frac{2}{8}$ 
5.	Which fraction is less ?	<input type="checkbox"/> $\frac{3}{4}$ 	<input type="checkbox"/> $\frac{3}{6}$ 