






	<p>Which way does the box move?</p> <p>Left / Right</p>		<p>The force to the right is ____N The force to the left is ____N The resultant force is ____N to the <b>left / right</b></p>
	<p>The box is:</p> <p>Right / Left / Not moving</p>		<p>The resultant force is ____N The box is moving to the Right / Left / Not moving</p>
	<p>The box is moving</p> <p>Left / right</p> <p>The resultant force is 5N to the left / right</p>		<p>The resultant force is ____N. This means the box is moving to the <b>right / left / not moving</b></p>
	<p>The force to the left is ____N The force to the right is ____N The resultant force is 10N to the left / right</p>		<p>The resultant force is ____N. The box is moving to the right / left / Not moving</p>