

<b>Subject</b>	Math	<b>Date</b>		<b>Roll No.</b>	
<b>Name</b>				<b>Grade/Section</b>	1 __

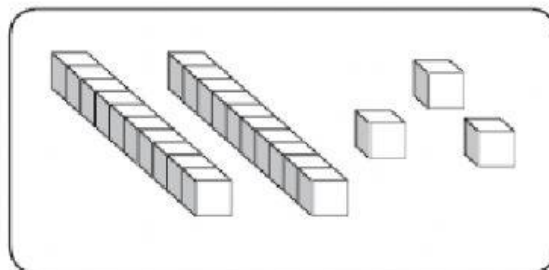
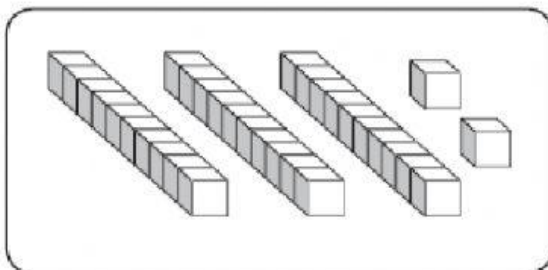
Task 1: Football cards come in packs of 10.



How many cards are there altogether?

	cards
--	-------

Task 2: Sam makes this numbers



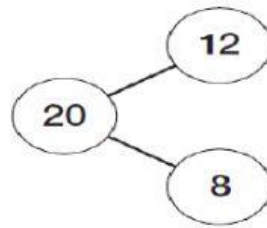
What numbers has he made?

	and	
--	-----	--

Which number is greater?

--

Task 3: Here is part-whole model



Use the model to make four different number sentences.

<input type="text"/>	+	<input type="text"/>	=	<input type="text"/>
<input type="text"/>	+	<input type="text"/>	=	<input type="text"/>
<input type="text"/>	-	<input type="text"/>	=	<input type="text"/>
<input type="text"/>	-	<input type="text"/>	=	<input type="text"/>

Task 4: Which item is the heaviest? Tick your answer.



Task 5: Estimate the capacity of this objects



- 2 L
- 200 mL
- 20 mL

- 50 mL
- 50 L
- 5 L