




Unit Test: Money

Nickname: _____

Part 1: Answer each question.

	CAD	26.5	baht
	CHF	35.88	baht
	CNY	5.17	baht

- 10 CAD = 265 baht
- 5 CAD = _____ baht
- 4 CHF = _____ baht
- 10 CHF = _____ baht
- 15 CNY = _____ baht
- 2 CNY = _____ baht

Part 2: Fill in the blanks and answer the questions.

Thai Money



- 2 one-thousand baht notes and 1 fifty-baht note is _____ baht.
- 3 one-hundred baht notes, 1 twenty baht note and 3 twenty-five satang coins is _____ baht.
- 1 five-hundred baht note and 7 twenty-baht notes is _____ baht.
- 4 ten-baht coins, 3 two-baht coins and 1 fifty-satang coins is _____ baht.
- 6 fifty-satang coins and 4 twenty-five satang coins is _____ baht.

Part 3: Answer the worded problems on money.

 $\begin{array}{r} 12 \\ 10.50 \end{array}$	 $\begin{array}{r} 169 \\ 153.50 \end{array}$	 $\begin{array}{r} 45 \\ 42.75 \end{array}$	 $\begin{array}{r} 47.50 \\ 45.75 \end{array}$
--	--	---	---

- How much do 2 bottles of oil cost?
Answer:
- How much do 1 box of milk, 1 packet of detergent, 1 toothpaste, and 1 bottle of oil cost altogether?
Answer:

- How much is the discount for a box of milk?
Answer:

- How much does 2 packets of detergent cost?
Answer: