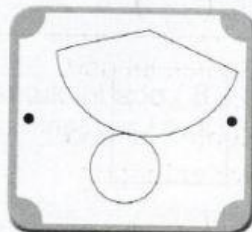
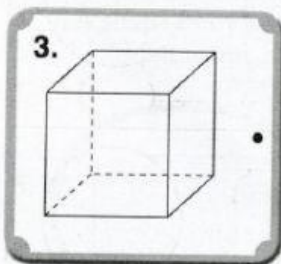
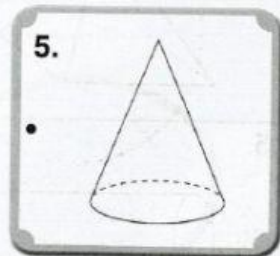
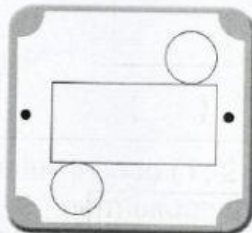
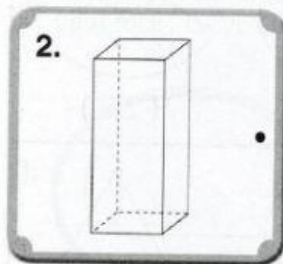
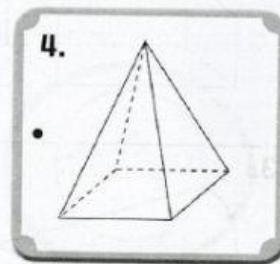


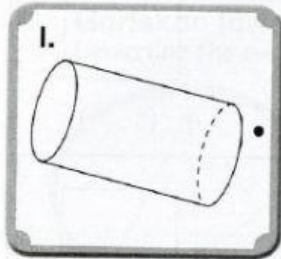


**7.3** Kenali bentangan bentuk 3D  
Recognise nets of 3-D shapes

**A. Padankan bentuk tiga dimensi dengan bentangan.**  
Match the three dimension shapes with their nets.



Name the shapes below and fill in the blanks.

1.

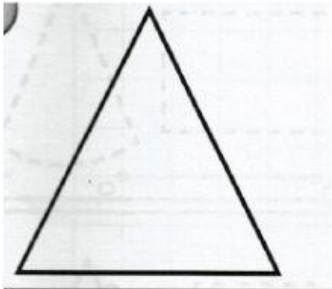


Name of the shape \_\_\_\_\_

This shape has \_\_\_\_\_ vertices

This shape has \_\_\_\_\_ straight edges.

2.



Name of the shape \_\_\_\_\_

This shape has \_\_\_\_\_ vertices

This shape has \_\_\_\_\_ straight edges


3.



Name of the shape \_\_\_\_\_

This shape has \_\_\_\_\_ vertices

This shape has \_\_\_\_\_ curved edges



Name of the shape \_\_\_\_\_

This shape has \_\_\_\_\_ vertices

This shape has \_\_\_\_\_ opposite straight edges