

Name: _____ Grade 1- _____

Science I/Quarter 2/Week 4

INFER THAT ANIMALS HAVE BODY PARTS THAT HELP THEM SURVIVE

I. Direction: Choose the letter of the correct answer.

1. What covers the body of a fish?
 - a. hair
 - b. scales
 - c. wet skin

2. What covers the body of a rabbit?
 - a. feathers
 - b. fur
 - c. scales






3. Where do frogs live?
 - a. on land
 - b. in water
 - c. both on land and in water

4. Which animal reproduces by giving birth to live young?
 - a. eagle
 - b. elephant
 - c. milkfish






5. How do most birds move?
 - a. by flying
 - b. by jumping
 - c. by walking



II. Direction: Write the group to which each animal belongs. Write if it is a **AMPHIBIAN, BIRD, FISH, MAMMAL, or REPTILE.**

1.		ANSWERS: _____
2.		_____
3. 4.		_____
5.		_____
6.		_____

III. **Direction:** What covers the body of each animal? Write **scales**, **scaly skin**, **shell**, **wet skin**, **feathers**, or **fur**.

<p>1.</p> 	<p>Polar bear: _____</p>
<p>2.</p> 	<p>Milk fish: _____</p>
<p>3.</p> 	<p>Parrot: _____</p>
<p>4.</p> 	<p>Turtle: _____</p>
<p>5.</p> 	<p>Dolphin: _____</p>