


MATHEMATICS YEAR 1
UNIT 8: DATA
SOLVE THE PROBLEMS

NAME: _____





CLASS: _____

Activity I

Look at the pictures. Complete the table and answer the questions.



Aisha's Stickers

Sticker	Tally	Number of stickers
 star		
 square		
 circle		
 triangle		

||

||

||||

|||| |

6

5

2

2

a Aisha has types of stickers.

b The stickers which has the same number are

and .

c The most number of stickers is the .

Activity 2

Look at the pictograph below. Answer the questions.

Ambitions of Pupils of Class I Cempaka

Teacher	☺☺☺☺☺
Lawyer	☺☺☺
Doctor	☺☺☺☺☺☺☺
Scientist	☺☺☺☺☺



☺ represents 1 pupil

a Name all the ambitions of pupils of class I Cempaka.

b Which ambition is favoured by 7 pupils?

c The least favoured ambition among the pupils is

d i. Name the ambition that has the same number of likes.


and

ii. What is the number?

Activity 3

Look at the pictograph. Answer the questions.

Books Read in NILAM Programme



a List the number of books read by:

Zura

David

Vinoth

Maria

b Who has read 5 books?



c Arrange the number of books in ascending order.

 → → →