


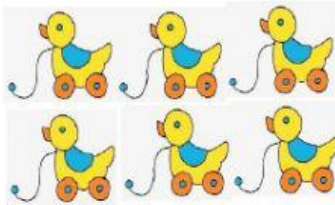
Date: _____

Let us add and find the sum.

Equal, sum, total, add,
more are some of the
words to remember.




a.



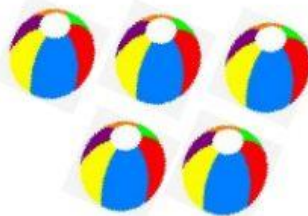
$$\square + \square = \square$$

b.



$$\square + \square = \square$$

c.



$$\square + \square = \square$$