
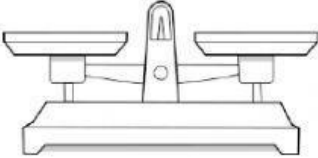



Measuring Matter

Choose the correct answer to name the measuring tools.

<p>1.</p>  <input type="text"/>	<p>2.</p>  <input type="text"/>	<p>3.</p>  <input type="text"/>
---	---	---

Drag the vocabulary word next to its description.

<input type="text" value="mass"/>	<input type="text" value="weight"/>	<input type="text" value="volume"/>	
<input type="text" value="graduate"/>	<input type="text" value="gram"/>	<input type="text" value="liter"/>	<input type="text" value="balance"/>

4. The amount of space an object takes up

5. The metric unit for measuring mass

6. A tool used to measure mass

7. The metric unit for measuring volume

8. A tool used to measure volume

9. The amount of matter in an object

10. The force of gravity acting on an object