
















Egypt Village Government Primary School
Christmas Term Test (2021)
Second Year Infants
Social Studies

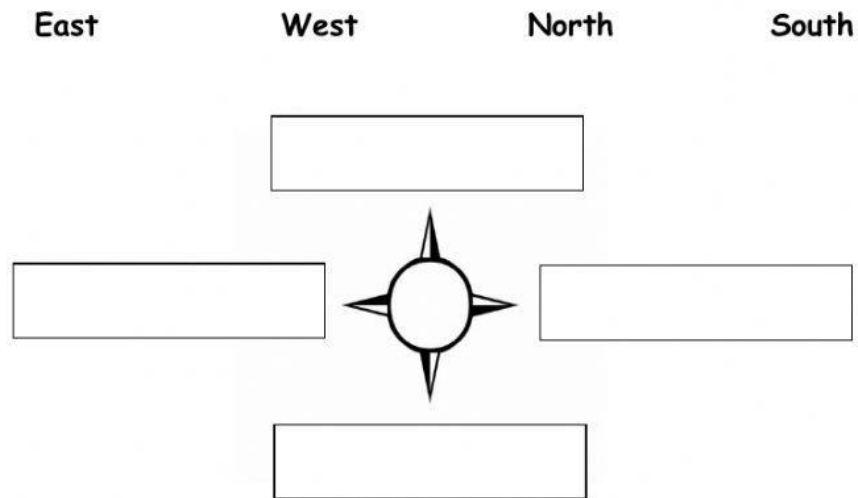
Tick the correct answer for the questions below.

1.	<p>The Prime Minister of Trinidad and Tobago is</p> <div style="display: flex; justify-content: space-around; align-items: center;">   </div>
2.	<p>The President of Trinidad and Tobago is</p> <div style="display: flex; justify-content: space-around; align-items: center;">   </div>
3.	<p>Tick the Coat of Arms of Trinidad and Tobago.</p> <div style="display: flex; justify-content: space-around; align-items: center;">   </div>
4.	<p>Which is National Instrument of Trinidad and Tobago ?</p> <div style="display: flex; justify-content: space-around; align-items: center;">   </div>
5.	<p>Match the National Bird to its name.</p> <div style="display: flex; justify-content: space-around; align-items: center;">  <div style="text-align: center;"> <p>Scarlet Ibis</p> <p>Cocrico</p> </div> </div>

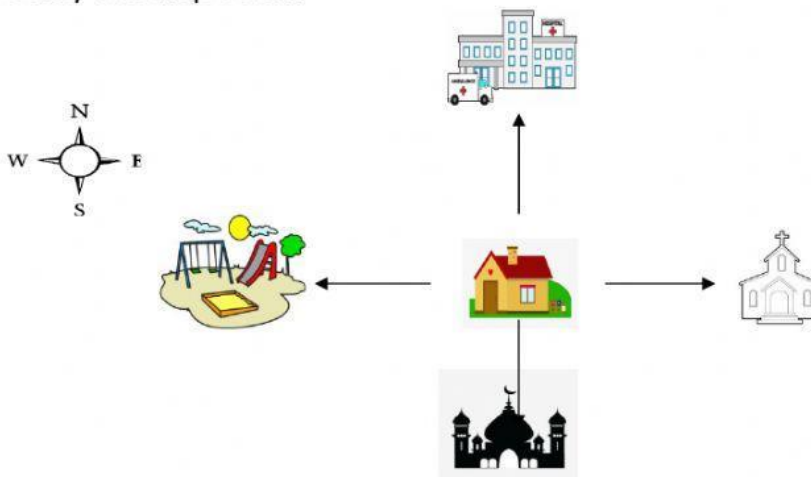
6.	<p>Tick the activity you will notice on Independence Day.</p> <div style="display: flex; justify-content: space-around; align-items: center;">   </div>
7.	<p>What national emblem can you see on the Trinidad and Tobago 25¢ coins?</p> <div style="text-align: center;">  </div> <p>a. the coat of arms</p> <p>b. the steelpan</p>
8.	<p>What is the name of your school?</p> <p>a. Point Fortin Government Primary</p> <p>b. Egypt Village Government Primary School</p> <p>c. Egypt Village R.C School</p>
9.	<p>Where is your school located?</p> <p>a. San Fernando</p> <p>b. Point Fortin</p> <p>c. Port - of Spain</p>
10.	<p>Children have a responsibility to go to school and learn.</p> <p>a. True</p> <p>b. False</p>

11.	<p>Tick the date that Universal Children's Day is observed.</p> <div style="display: flex; justify-content: space-around; align-items: center;"> <div style="border: 1px solid black; padding: 5px; text-align: center;">20th November</div>  <div style="border: 1px solid black; padding: 5px; text-align: center;">14th February</div> </div>												
12.	<p>Christmas is about;</p> <p>a. Santa clause</p> <p>b. The birth of Jesus Christ</p>												
13.	<p>Who celebrates Christmas ? Tick the correct name.</p> <div style="display: flex; justify-content: space-around; align-items: center;"> <div style="text-align: center;"> <p>Christians</p>  </div> <div style="text-align: center;"> <p>Hindus</p>  </div> </div>												
14.	<p>Put a tick ✓ if the sentence is true.</p> <table border="1" style="width: 100%; border-collapse: collapse;"> <tr> <td style="padding: 5px;">a. Republic Day is on the 24th of September every year.</td> <td style="width: 10%;"></td> </tr> <tr> <td style="padding: 5px;">b. Muslims celebrate Divali.</td> <td></td> </tr> <tr> <td style="padding: 5px;">c. Divali is celebrated on the darkest night.</td> <td></td> </tr> <tr> <td style="padding: 5px;">d. Divali is the festival of light.</td> <td></td> </tr> <tr> <td style="padding: 5px;">e. Christmas is in the month of March.</td> <td></td> </tr> <tr> <td style="padding: 5px;">f. Children have a right to be loved and have a family.</td> <td></td> </tr> </table>	a. Republic Day is on the 24 th of September every year.		b. Muslims celebrate Divali.		c. Divali is celebrated on the darkest night.		d. Divali is the festival of light.		e. Christmas is in the month of March.		f. Children have a right to be loved and have a family.	
a. Republic Day is on the 24 th of September every year.													
b. Muslims celebrate Divali.													
c. Divali is celebrated on the darkest night.													
d. Divali is the festival of light.													
e. Christmas is in the month of March.													
f. Children have a right to be loved and have a family.													

15. **Drag and drop** the words to show the **direction** each arrow is pointing.



16. Study the map below.



Select the words to complete the sentences.

- a. The park is _____ of the home.
- b. The mosque is _____ of the home.
- c. The church is _____ of the home.
- d. The hospital is _____ of the home.

17. Match the transport to the correct mode.



Land



Air



Sea

18. Tick ✓ **two forms** of transport Kayla can use to travel from Trinidad to Tobago?

Car	
Boat	
Airplane	
Bike	



End of Test Merry Christmas

