

Assessment 2 Topic: Shapes / Recognise 3D shapes

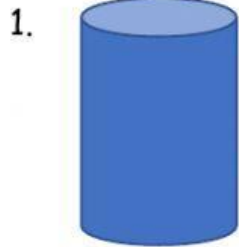
Name: _____

Day: _____

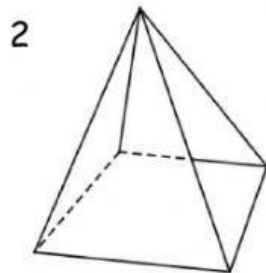
Class: _____

Date: _____

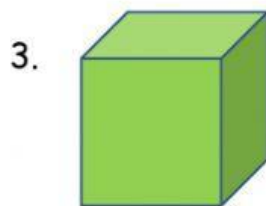
(b) Fill in the blanks.



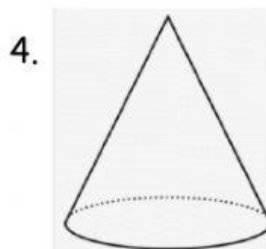
This is
It has _____ flat faces and _____ curved face.



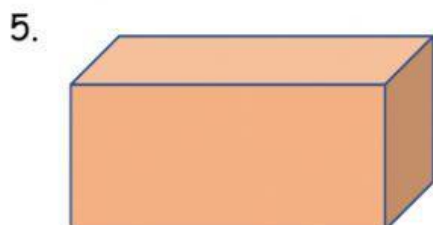
This is
It has _____ flat faces and _____ vertices.



This is
It has _____ flat faces and _____ vertices.



This is
It has _____ vertex, _____ curved face and
_____ flat faces.



This is
It has _____ vertices and _____ flat
faces.