
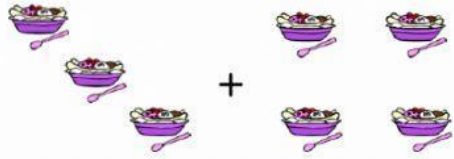


Math
Addition to 10 (C.W.)


Find the sum.



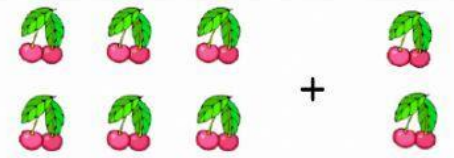
$7 + 1 = \underline{\quad}$




$3 + 4 = \underline{\quad}$



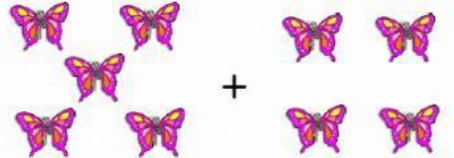
$4 + 1 = \underline{\quad}$



$6 + 2 = \underline{\quad}$



$3 + 2 = \underline{\quad}$



$5 + 4 = \underline{\quad}$

Read the word problem. Write a number sentence to solve.

Kate had 5 shells. She found 3 more shells. How many shells does she have in all?

DRAW IT:

$\underline{\quad} + \underline{\quad} = \underline{\quad}$

TALLY:



Dan saw 4 yellow starfish. John saw 5 red starfish. How many starfish did they see altogether?

DRAW IT:

$\underline{\quad} + \underline{\quad} = \underline{\quad}$

TALLY:

