

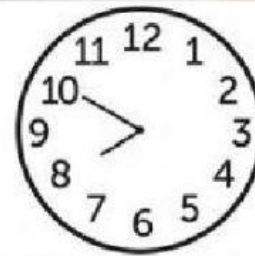
TELLING THE TIME WORKSHEET

NAME:


A. MATCH THE TIME




It's quarter past twelve



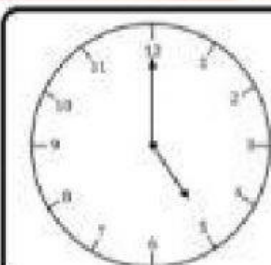
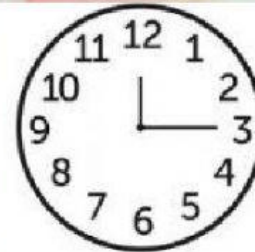
It's ten minutes past nine



It's ten minutes to eight



It's twenty-five past seven



5:00

12:00

3:00



11:00

12:00

3:00

PRACTICE TO SPEAK

It's half to eleven

Can you tell me what time is it now?

It's a quarter past six

It's two twenty-five