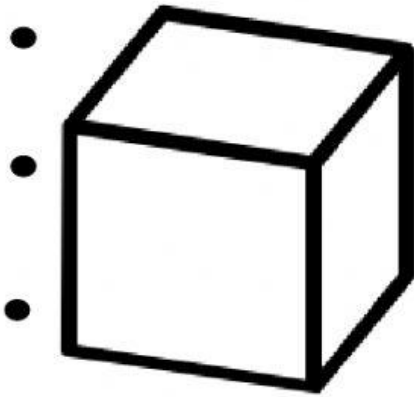


Name: _____

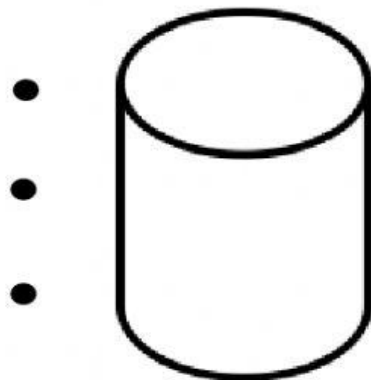
Click the name and property of each shape and **drag** it on the dot in the shape.



Cuboid

Has 6 faces

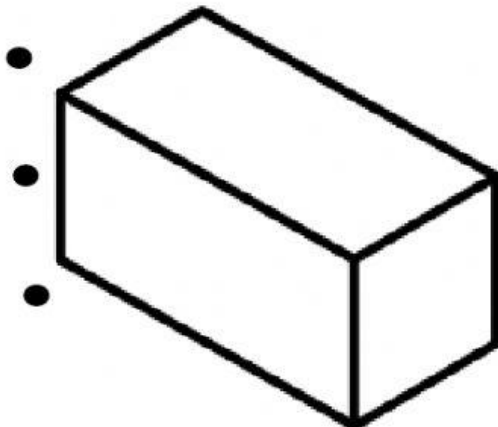
Has 12 edges and 8 vertices



Cube

Has 6 faces

Has 12 edges and 8 vertices



Cylinder

Has 2 faces

Has 1 curved surface and 2 edges