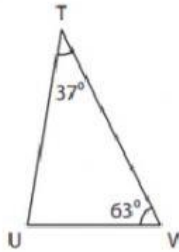


# Interior Angle

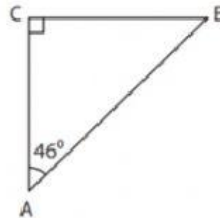
Find the measure of the indicated angle in each triangle.

1)



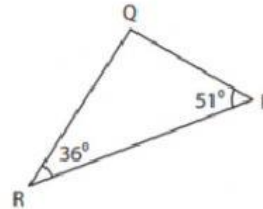
$m\angle U =$  \_\_\_\_\_

2)



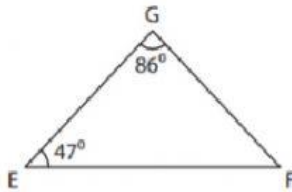
$m\angle B =$  \_\_\_\_\_

3)



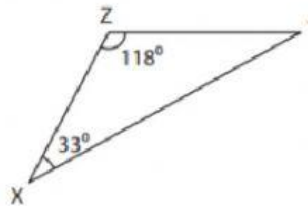
$m\angle Q =$  \_\_\_\_\_

4)



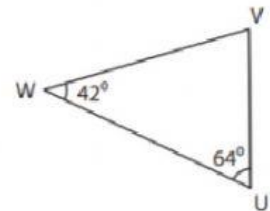
$m\angle F =$  \_\_\_\_\_

5)



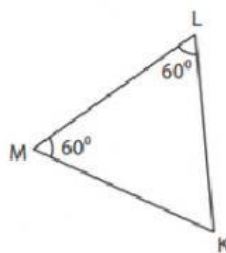
$m\angle Y =$  \_\_\_\_\_

6)



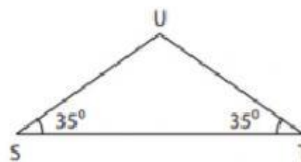
$m\angle V =$  \_\_\_\_\_

7)



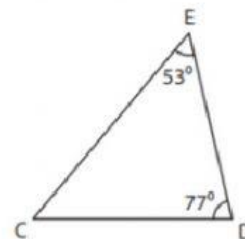
$m\angle K =$  \_\_\_\_\_

8)



$m\angle U =$  \_\_\_\_\_

9)



$m\angle C =$  \_\_\_\_\_

