



EGYPT VILLAGE GOVERNMENT SCHOOL


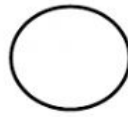
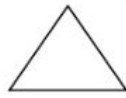
Christmas Term Test (2021)

Second Year Infants

Mathematics

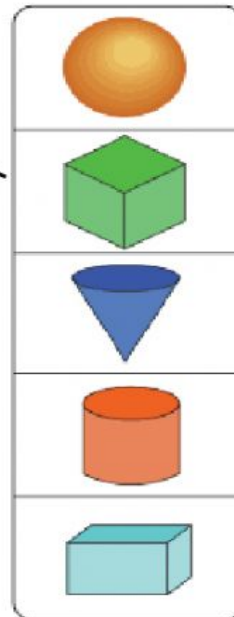
1.	<p>Fill in the missing numbers that comes before.</p> <p>a. _____, 4</p> <p>Fill in the missing numbers that comes after.</p> <p>b. 7 , _____</p>
2.	<p>Tick the box which has 12 objects.</p> <div></div> <div></div>
3.	<p>Write the word name for the numerals below</p> <p>8 _____</p>
4.	<p>Complete the number pattern.</p> <p>2, 4, _____, _____, 10, 12</p>
5.	<p>Write the numerals for the word name given.</p> <p>nine _____</p> <p>eleven _____</p>

6. Tick the face of a cuboid.



7. Draw a line to match the name to the shape.

- cube
- sphere
- cuboid
- cone
- cylinder



8. Tick the shape which has 6 faces.



9. How much money is shown?












_____ ¢

10.

Complete:



This pencil is as long as _____ paper clips

11.	<p>Tick the object which holds less.</p> <div style="display: flex; justify-content: space-around; align-items: center;">   </div>
12.	<p>Complete the number sentences.</p> <div style="display: flex; justify-content: space-between;"> <p>a. $6 + 4 = \underline{\hspace{2cm}}$</p> <p>b. $12 - 6 = \underline{\hspace{2cm}}$</p> </div>
13.	<p>Ben has 5 books. </p> <p>Israel has 3 books. </p> <p>How many do they have altogether? </p>
14.	<p>Meg had 11 marbles. </p> <p>She lost 7.</p> <p>How many does she have left? </p>
15.	<p>Tick the shortest object.</p> <div style="display: flex; justify-content: space-around; align-items: center;">    </div>
16.	<p>Make sets of 2 apples.</p> <div style="text-align: center;">  </div> <p>There are sets of 2 apples.</p>

17.







Choose the correct answer.

- a. Who is first in line? _____
- b. In what position is James? _____

18.

Ice-cream Sale

Monday	
Tuesday	
Wednesday	
Thursday	

- a. On what day was the **most** ice-cream cones sold? _____
- b. How many ice-cream cones were sold on Tuesday? _____
- c. The **least** ice-cream cones were sold on _____.
- d. How many more ice cream cones were sold on Thursday than on Wednesday? _____



End of Test Merry Christmas

