



## The Primary Stage of Grades (1-3)

### Science Assessment (2)

Name: \_\_\_\_\_

Grade: One national ( A, B )

Date: \_\_\_\_\_

Term one

Q1) Select the pictures of living things.

(3 points)



Q2) Select **True** if the sentence is correct and **False** if the sentence is not correct.  
(5 points)

1.	All Living things breathe.	<b>True</b>	<b>False</b>
2.	Exercise makes our body healthy and strong.	<b>True</b>	<b>False</b>
3.	The table is a living thing.	<b>True</b>	<b>False</b>
4.	The bag moves.	<b>True</b>	<b>False</b>
5.	The chicken grows.	<b>True</b>	<b>False</b>







Q3) Classify these living things according to how they reproduce.

Put tick (✓) in the right column.

(4

points)

Living Thing	Birth	Eggs
		
		
		
		



Q4) Show one thing that living things can do.

Drag the words in the box to match the picture. (3 points)

Breathe	Grow	Eat	Move	Reproduce
---------	------	-----	------	-----------



---



---



---