



## Review 2. Mathematics Grade 1

*Bismillahirrahmaanirrahim*

Read the instructions well to answer correctly.

1) Match by drawing lines.

second ♥

♥ 9<sup>th</sup>

first ♥

♥ 1<sup>st</sup>

ninth ♥

♥ 3<sup>rd</sup>


third ♥

♥ 5<sup>th</sup>

fifth ♥

♥ 2<sup>nd</sup>

2) Click the arrow  and choose the position.



The cat is in the \_\_\_\_\_ from the left.

3) Drag and place each animal correctly in the box.

- The crab is the 1<sup>st</sup> from the left.
- The jellyfish is the 3<sup>rd</sup> from the left.



4) Type the correct answer in the box.

- a. What is the first day in a week? \_\_\_\_\_
- b. What is the last day in a week? \_\_\_\_\_
- c. What is the day after Wednesday? \_\_\_\_\_



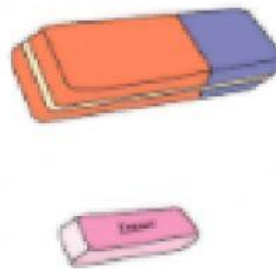
5) Drag and drop the days below into the correct order.

Tuesday	
Sunday	
Monday	
Saturday	
Thursday	
Wednesday	
Friday	


6) Click the taller child.



7) Click the longer object.



8) Click the shorter object.




9) Click the tallest person.





10) Click the shortest ladder.




11) Click the longest rope.



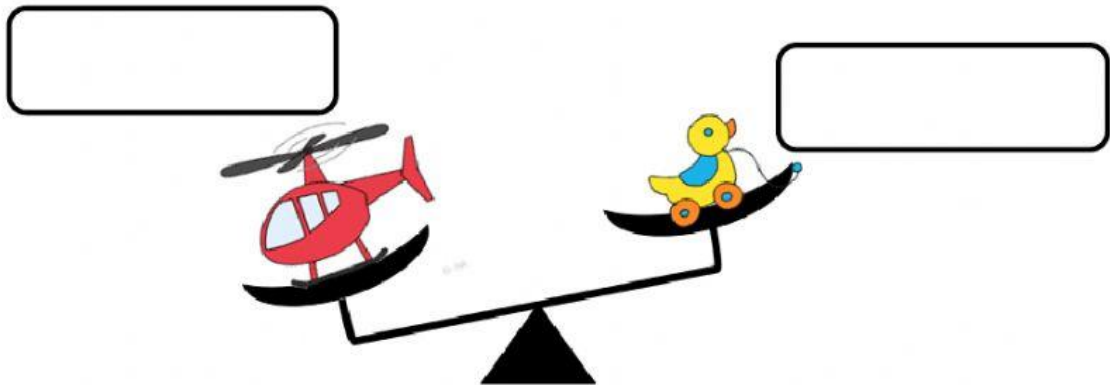
12) Click the heavier fruit.



13) Click the lighter thing.



14) Click the arrow ▼ and choose 'lighter' or 'heavier'.



*Alhamdulillahirraabbi'alamiin*