

WORKSHEET 5



Subject: Mathematics

Ay/Term 2nd Term, AY 2021 Score: _____

Topic: Parallel line

Worksheet No. _____ Date: _____

Student name: _____ Class: _____ Student No. _____

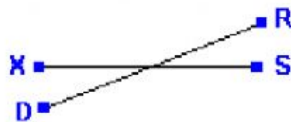


Parallel line, intersecting line and perpendicular line



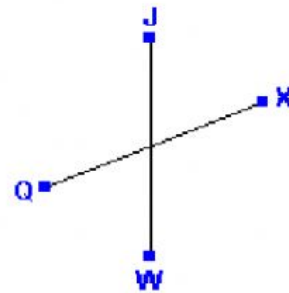
Write parallel line, intersecting line or perpendicular line.

1)



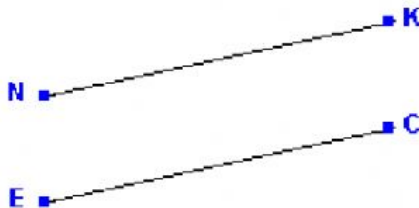
Answer: _____

4)



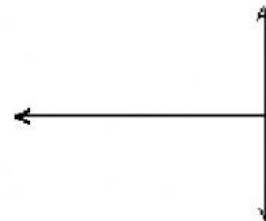
Answer: _____

2)



Answer: _____

5)




Answer: _____

3)



Answer: _____

6)



Answer: _____