




Wat Khien Khet School  
(MEP Prathom 1)  
Math Worksheet (Length-Word Problem)

Name: \_\_\_\_\_ Number: \_\_\_\_\_

Part A. Compare the length of the following.


1. Compare the length of *pen* and *sharpener*.



Number sentence:  $14 \text{ cm} - 3 \text{ cm} = \boxed{\phantom{00}}$

= The pen is  $\boxed{\phantom{00}}$  cm *longer* than the sharpener.

2. Compare the length of *pencil* and *sharpener*.



Number sentence:  $10 \text{ cm} - \boxed{\phantom{00}} = \boxed{\phantom{00}}$



= The sharpener is  $\boxed{\phantom{00}}$  cm *shorter* than the pencil.

Part B.Direction: Read and answer the word problem.

3. I buy 8 bananas in the market. I eat 4 of the bananas. How many bananas are left?

Solution:  -  =

Answer: There are  bananas left.

4. There are 8 blue fish  and 6 yellow fish . How many fishes are there in total?

Solution:  +  =

Answer: There are  fishes in total.

5. Tony has a rope that is 14 m long. He uses 6 m of the rope to tie some boxes. What is the length of the rope left?

Solution:  -  =

Answer: The length of the rope left is .