

FEBEAU GOVERNMENT PRIMARY SCHOOL

END OF TERM TEST

Standard 3 term 1

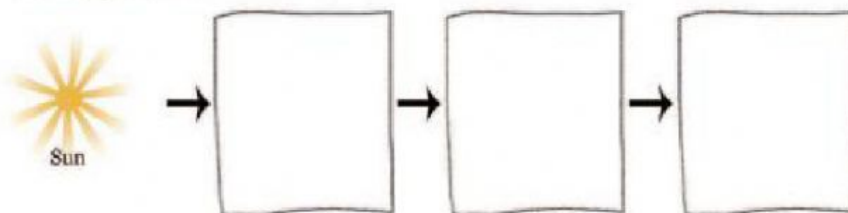
Science/Agri-Science

SECTION I

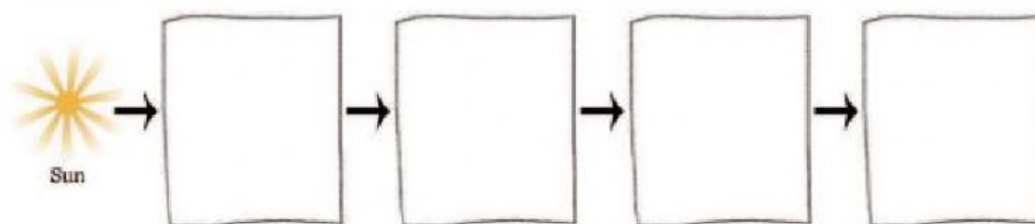
(10 marks)

Write the name of the organism in the box provided to complete the food chain.

1. deer, grass, wolf



2. Corn, mouse, snake, hawk



3. Which of the following is a PRODUCER?

- a. Mouse
- b. Lettuce
- c. Human
- d. Lion

4. Which best represents the flow of energy through a food chain?

- a. Sun → grasshopper → plant → frog
- b. plant → grasshopper → frog → sun
- c. Sun → plant → frog → grasshopper
- d. Sun → plant → grasshopper → frog

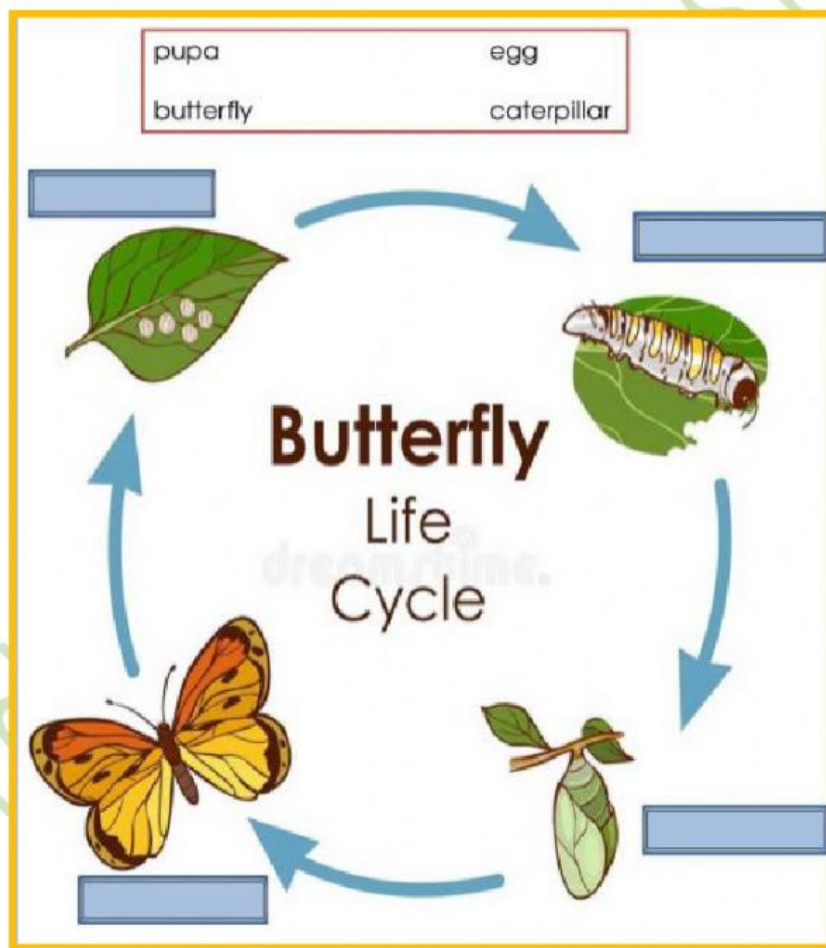
5. Animals which feed on both plants and animals are called?

- a. carnivores
- b. predators
- c. omnivores
- d. herbivores

SECTION II

(4 marks)

Write the correct item in the box provided



SECTION III

(4 marks)

6. Which of the following is true of the use of Agricultural Technologies?
- a. They only allow you to send text messages.
 - b. The production of vast quantities of food in the shortest time.
 - c. It causes food to spoil
 - d. Farmers spend more time doing less work.
7. Why do farmers use Cooling facilities?
- a. To get more milk from cows.
 - b. To keep perishable crops fresh longer.
 - c. To keep the tractors from overheating.
 - d. To prevent the sun from burning the animals.

SECTION IV

What causes HUMIDITY?

(2 marks)

8. Why do animals CAMOUFLAGE themselves?

(2 marks)

9. Name three (3) animals that can Camouflage themselves:

(3 marks)

END OF TEST