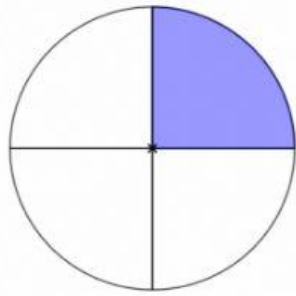
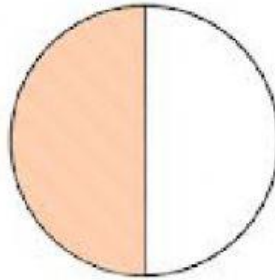



Name: _____ Date: _____

A. Say what fraction of each shape is shaded.


$\frac{1}{2}$	1	$\frac{1}{4}$
---------------	---	---------------









B. Shade each shape below into the fraction.




1



$\frac{1}{2}$



$\frac{1}{4}$



Name: _____

Date: _____