

























Mathematics

PICTOGRAPH

The following pictograph represents data about plants sold at a nursery. Answer the questions below based on the data provided in the table.

Poinsettias	   
Rose	    
Lilly	      
Violet	   
Dahlia	  
1  = 5 Plants	

1. How many Dahlia's were sold?
2. Which plant variety was sold the most?
3. Which was the unpopular variety?
4. How many lilies were sold?
5. How many plants were sold in total?